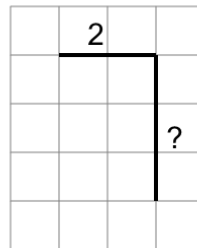




Math worksheet on 'Length of a Line on a Grid - 2 Segment, 1 Labelled (Irregular) - To Length (Level 1)'. Part of a broader unit on 'Perimeter Intro'

Learn online: app.mobius.academy/math/units/perimeter_intro/

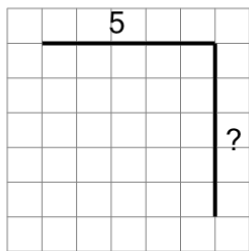
1



Find the length of the line on this grid of 1x1 squares

a	7	b	3
c	1	d	2
e	5	f	13

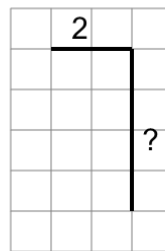
2



Find the length of the line on this grid of 1x1 squares

a	5	b	16
c	4	d	3
e	10	f	6

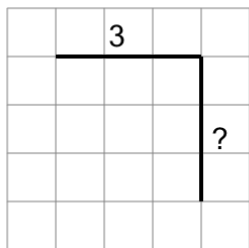
3



Find the length of the line on this grid of 1x1 squares

a	14	b	3
c	1	d	10
e	2	f	6

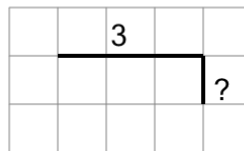
4



Find the length of the line on this grid of 1x1 squares

a	14	b	2
c	1	d	6
e	13	f	7

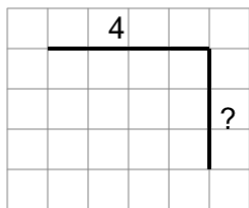
5



Find the length of the line on this grid of 1x1 squares

a	4	b	2
c	10	d	3
e	8	f	5

6



Find the length of the line on this grid of 1x1 squares

a	1	b	12
c	7	d	4
e	8	f	11