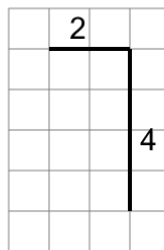




Math worksheet on 'Length of a Line on a Grid - 2 Segment, 2 Labelled (Irregular) - To Length (Level 1)'. Part of a broader unit on 'Perimeter Intro'

Learn online: app.mobius.academy/math/units/perimeter_intro/

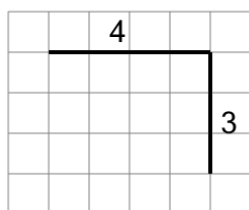
1



Find the length of the line on this grid of 1x1 squares

a	14	b	3
c	12	d	15
e	9	f	6

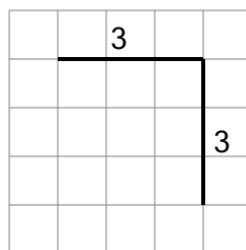
2



Find the length of the line on this grid of 1x1 squares

a	4	b	13
c	10	d	16
e	7	f	5

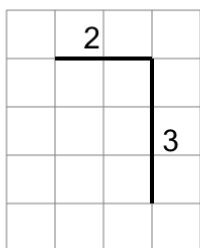
3



Find the length of the line on this grid of 1x1 squares

a	4	b	2
c	5	d	7
e	14	f	6

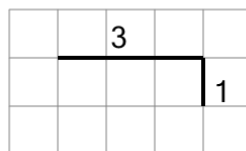
4



Find the length of the line on this grid of 1x1 squares

a	6	b	2
c	3	d	4
e	10	f	5

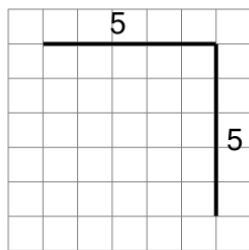
5



Find the length of the line on this grid of 1x1 squares

a	9	b	10
c	7	d	3
e	6	f	4

6



Find the length of the line on this grid of 1x1 squares

a	11	b	6
c	2	d	9
e	10	f	19