

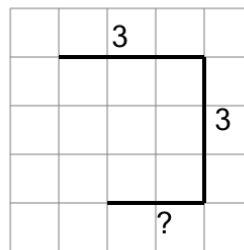


Math worksheet on 'Length of a Line on a Grid - 3 Segment, 2 Labelled (Irregular) - To Length (Level 1)'. Part of a broader unit on 'Perimeter Intro'

Learn online: [app.mobius.academy/math/units/perimeter\\_intro/](http://app.mobius.academy/math/units/perimeter_intro/)

1

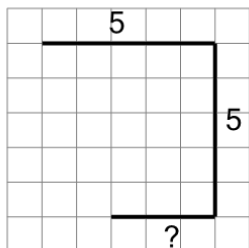
Find the length of the line on this grid of 1x1 squares



|          |    |          |    |
|----------|----|----------|----|
| <b>a</b> | 15 | <b>b</b> | 8  |
| <b>c</b> | 11 | <b>d</b> | 14 |
| <b>e</b> | 5  | <b>f</b> | 2  |

2

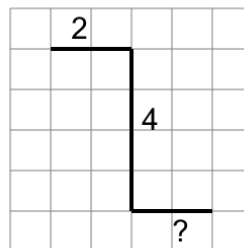
Find the length of the line on this grid of 1x1 squares



|          |    |          |    |
|----------|----|----------|----|
| <b>a</b> | 9  | <b>b</b> | 13 |
| <b>c</b> | 11 | <b>d</b> | 14 |
| <b>e</b> | 12 | <b>f</b> | 3  |

3

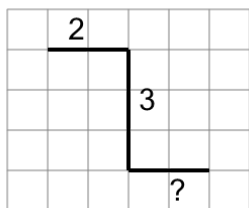
Find the length of the line on this grid of 1x1 squares



|          |    |          |    |
|----------|----|----------|----|
| <b>a</b> | 10 | <b>b</b> | 17 |
| <b>c</b> | 11 | <b>d</b> | 8  |
| <b>e</b> | 3  | <b>f</b> | 9  |

4

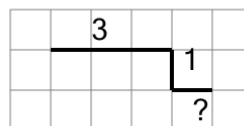
Find the length of the line on this grid of 1x1 squares



|          |    |          |    |
|----------|----|----------|----|
| <b>a</b> | 5  | <b>b</b> | 7  |
| <b>c</b> | 2  | <b>d</b> | 11 |
| <b>e</b> | 16 | <b>f</b> | 1  |

5

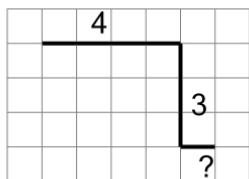
Find the length of the line on this grid of 1x1 squares



|          |    |          |    |
|----------|----|----------|----|
| <b>a</b> | 3  | <b>b</b> | 13 |
| <b>c</b> | 12 | <b>d</b> | 7  |
| <b>e</b> | 2  | <b>f</b> | 5  |

6

Find the length of the line on this grid of 1x1 squares



|          |    |          |    |
|----------|----|----------|----|
| <b>a</b> | 1  | <b>b</b> | 17 |
| <b>c</b> | 16 | <b>d</b> | 14 |
| <b>e</b> | 2  | <b>f</b> | 8  |