

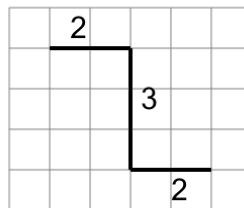


Math worksheet on 'Length of a Line on a Grid - 3 Segment, 3 Labelled (Irregular) - To Length (Level 1)'. Part of a broader unit on 'Perimeter Intro'

Learn online: app.mobius.academy/math/units/perimeter_intro/

1

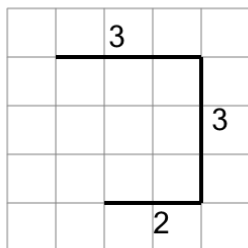
Find the length of the line on this grid of 1x1 squares



a	2	b	5
c	10	d	3
e	7	f	9

2

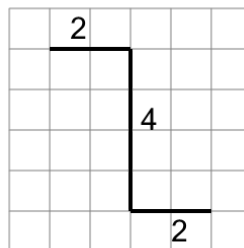
Find the length of the line on this grid of 1x1 squares



a	3	b	5
c	1	d	8
e	7	f	17

3

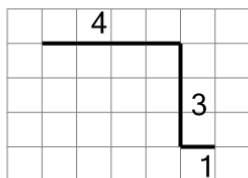
Find the length of the line on this grid of 1x1 squares



a	4	b	2
c	17	d	8
e	11	f	1

4

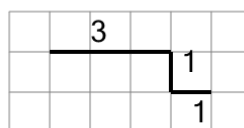
Find the length of the line on this grid of 1x1 squares



a	2	b	7
c	5	d	6
e	14	f	8

5

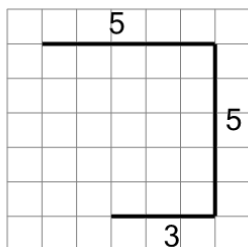
Find the length of the line on this grid of 1x1 squares



a	11	b	5
c	12	d	13
e	3	f	10

6

Find the length of the line on this grid of 1x1 squares



a	11	b	13
c	15	d	14
e	18	f	7