



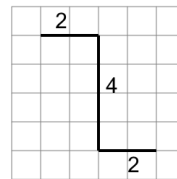
Math worksheet on 'Length of a Line on a Grid - 3 Segment, 3 Labelled (Irregular) - To Shape (Level 1)'. Part of a broader unit on 'Perimeter Intro'

Learn online: app.mobius.academy/math/units/perimeter_intro/

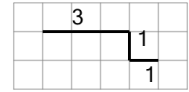
1

Find the line that has a length of 8 on the grid of 1x1 squares

a



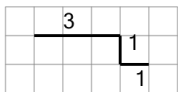
b



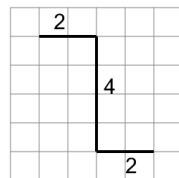
2

Find the line that has a length of 5 on the grid of 1x1 squares

a



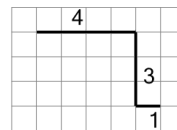
b



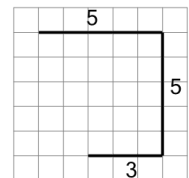
3

Find the line that has a length of 8 on the grid of 1x1 squares

a



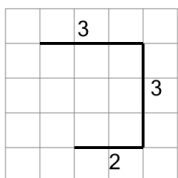
b



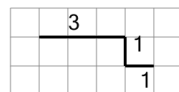
4

Find the line that has a length of 8 on the grid of 1x1 squares

a



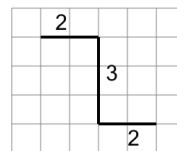
b



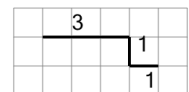
5

Find the line that has a length of 7 on the grid of 1x1 squares

a



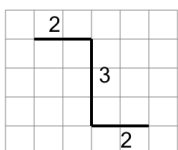
b



6

Find the line that has a length of 13 on the grid of 1x1 squares

a



b

