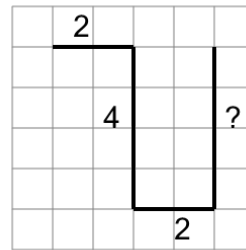




Math worksheet on 'Length of a Line on a Grid - 4 Segment, 3 Labelled (Irregular) - To Length (Level 1)'. Part of a broader unit on 'Perimeter Intro'

Learn online: app.mobius.academy/math/units/perimeter_intro/

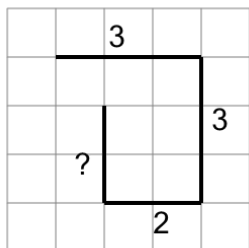
1



Find the length of the line on this grid of 1x1 squares

| | | | |
|----------|----|----------|----|
| a | 5 | b | 11 |
| c | 12 | d | 17 |
| e | 9 | f | 19 |

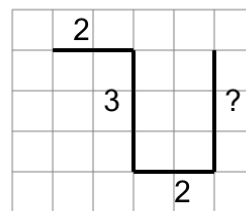
2



Find the length of the line on this grid of 1x1 squares

| | | | |
|----------|----|----------|----|
| a | 9 | b | 11 |
| c | 10 | d | 18 |
| e | 2 | f | 17 |

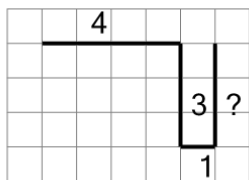
3



Find the length of the line on this grid of 1x1 squares

| | | | |
|----------|----|----------|----|
| a | 6 | b | 13 |
| c | 3 | d | 1 |
| e | 10 | f | 14 |

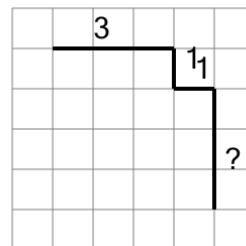
4



Find the length of the line on this grid of 1x1 squares

| | | | |
|----------|----|----------|----|
| a | 9 | b | 20 |
| c | 12 | d | 4 |
| e | 8 | f | 11 |

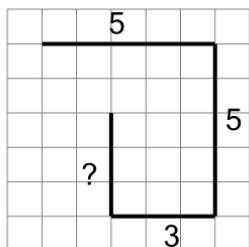
5



Find the length of the line on this grid of 1x1 squares

| | | | |
|----------|----|----------|----|
| a | 3 | b | 13 |
| c | 10 | d | 7 |
| e | 5 | f | 8 |

6



Find the length of the line on this grid of 1x1 squares

| | | | |
|----------|----|----------|----|
| a | 9 | b | 14 |
| c | 21 | d | 18 |
| e | 12 | f | 16 |