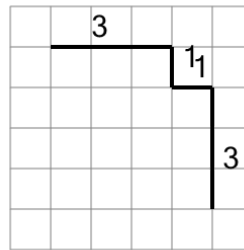




Math worksheet on 'Length of a Line on a Grid - 4 Segment, 4 Labelled (Irregular) - To Length (Level 1)'. Part of a broader unit on 'Perimeter Intro'

Learn online: [app.mobius.academy/math/units/perimeter\\_intro/](http://app.mobius.academy/math/units/perimeter_intro/)

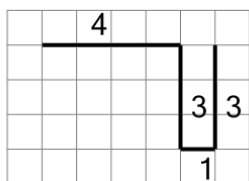
1



Find the length of the line on this grid of 1x1 squares

<b>a</b>	3	<b>b</b>	1
<b>c</b>	8	<b>d</b>	9
<b>e</b>	5	<b>f</b>	2

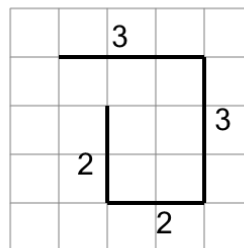
2



Find the length of the line on this grid of 1x1 squares

<b>a</b>	19	<b>b</b>	16
<b>c</b>	3	<b>d</b>	20
<b>e</b>	12	<b>f</b>	11

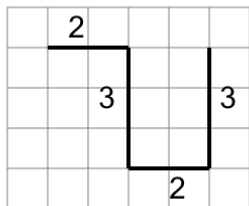
3



Find the length of the line on this grid of 1x1 squares

<b>a</b>	13	<b>b</b>	3
<b>c</b>	8	<b>d</b>	14
<b>e</b>	7	<b>f</b>	10

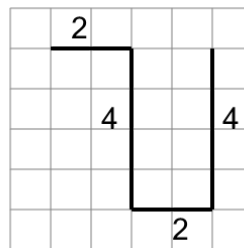
4



Find the length of the line on this grid of 1x1 squares

<b>a</b>	9	<b>b</b>	16
<b>c</b>	7	<b>d</b>	10
<b>e</b>	11	<b>f</b>	8

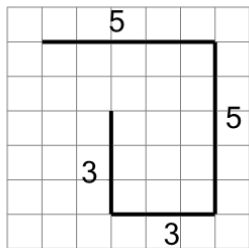
5



Find the length of the line on this grid of 1x1 squares

<b>a</b>	18	<b>b</b>	6
<b>c</b>	12	<b>d</b>	15
<b>e</b>	8	<b>f</b>	4

6



Find the length of the line on this grid of 1x1 squares

<b>a</b>	21	<b>b</b>	19
<b>c</b>	16	<b>d</b>	11
<b>e</b>	13	<b>f</b>	20