

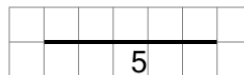


Math worksheet on 'Length of a Line on a Grid - 1 Segment, 1 Labelled (Regular) - To Length (Level 1)'. Part of a broader unit on 'Perimeter Intro'

Learn online: app.mobius.academy/math/units/perimeter_intro/

1

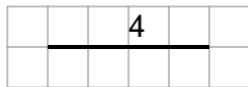
Find the length of the line on this grid of 1x1 squares



a	6	b	5
c	2	d	7
e	3	f	12

2


Find the length of the line on this grid of 1x1 squares



a	12	b	13
c	4	d	11
e	5	f	9

3


Find the length of the line on this grid of 1x1 squares



a	2	b	6
c	7	d	5
e	1	f	3

4

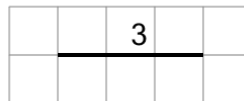
Find the length of the line on this grid of 1x1 squares



a	2	b	11
c	6	d	3
e	8	f	4

5

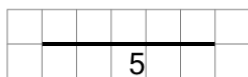
Find the length of the line on this grid of 1x1 squares



a	2	b	4
c	11	d	12
e	3	f	7

6

Find the length of the line on this grid of 1x1 squares



a	10	b	7
c	5	d	3
e	2	f	6