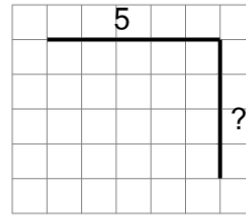




Math worksheet on 'Length of a Line on a Grid - 2 Segment, 1 Labelled (Regular) - To Length (Level 1)'. Part of a broader unit on 'Perimeter Intro'

Learn online: [app.mobius.academy/math/units/perimeter\\_intro/](http://app.mobius.academy/math/units/perimeter_intro/)

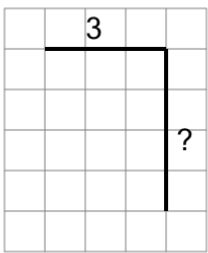
1



Find the length of the line on this grid of 1x1 squares

<b>a</b>	15	<b>b</b>	1
<b>c</b>	5	<b>d</b>	17
<b>e</b>	9	<b>f</b>	3

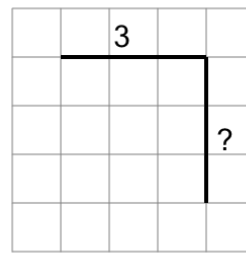
2



Find the length of the line on this grid of 1x1 squares

<b>a</b>	11	<b>b</b>	7
<b>c</b>	2	<b>d</b>	1
<b>e</b>	6	<b>f</b>	12

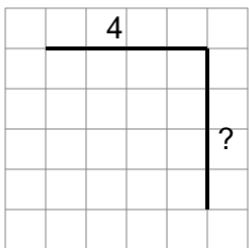
3



Find the length of the line on this grid of 1x1 squares

<b>a</b>	11	<b>b</b>	6
<b>c</b>	12	<b>d</b>	13
<b>e</b>	10	<b>f</b>	9

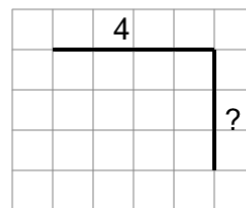
4



Find the length of the line on this grid of 1x1 squares

<b>a</b>	5	<b>b</b>	1
<b>c</b>	12	<b>d</b>	3
<b>e</b>	8	<b>f</b>	11

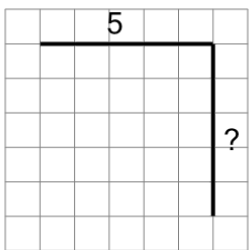
5



Find the length of the line on this grid of 1x1 squares

<b>a</b>	4	<b>b</b>	2
<b>c</b>	7	<b>d</b>	11
<b>e</b>	10	<b>f</b>	9

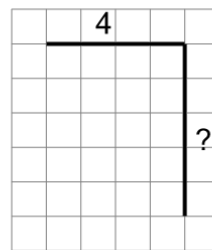
6



Find the length of the line on this grid of 1x1 squares

<b>a</b>	19	<b>b</b>	13
<b>c</b>	3	<b>d</b>	4
<b>e</b>	10	<b>f</b>	16

7



Find the length of the line on this grid of 1x1 squares

<b>a</b>	15	<b>b</b>	13
<b>c</b>	14	<b>d</b>	11
<b>e</b>	9	<b>f</b>	2