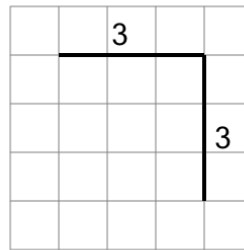




Math worksheet on 'Length of a Line on a Grid - 2 Segment, 2 Labelled (Regular) - To Length (Level 1)'. Part of a broader unit on 'Perimeter Intro'

Learn online: [app.mobius.academy/math/units/perimeter\\_intro/](http://app.mobius.academy/math/units/perimeter_intro/)

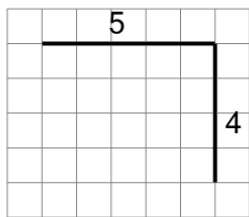
1



Find the length of the line on this grid of 1x1 squares

<b>a</b>	3	<b>b</b>	8
<b>c</b>	7	<b>d</b>	6
<b>e</b>	1	<b>f</b>	4

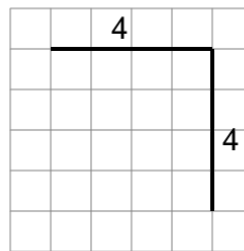
2



Find the length of the line on this grid of 1x1 squares

<b>a</b>	8	<b>b</b>	11
<b>c</b>	1	<b>d</b>	14
<b>e</b>	9	<b>f</b>	6

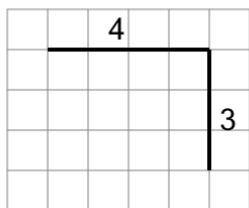
3



Find the length of the line on this grid of 1x1 squares

<b>a</b>	6	<b>b</b>	9
<b>c</b>	17	<b>d</b>	5
<b>e</b>	8	<b>f</b>	4

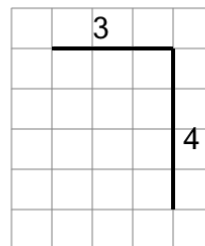
4



Find the length of the line on this grid of 1x1 squares

<b>a</b>	12	<b>b</b>	3
<b>c</b>	7	<b>d</b>	1
<b>e</b>	2	<b>f</b>	14

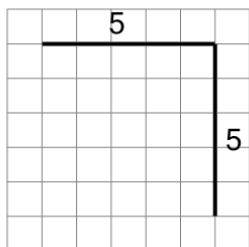
5



Find the length of the line on this grid of 1x1 squares

<b>a</b>	15	<b>b</b>	3
<b>c</b>	1	<b>d</b>	4
<b>e</b>	2	<b>f</b>	7

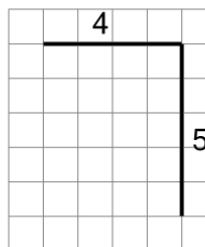
6



Find the length of the line on this grid of 1x1 squares

<b>a</b>	1	<b>b</b>	16
<b>c</b>	12	<b>d</b>	10
<b>e</b>	14	<b>f</b>	6

7



Find the length of the line on this grid of 1x1 squares

<b>a</b>	11	<b>b</b>	1
<b>c</b>	10	<b>d</b>	16
<b>e</b>	9	<b>f</b>	6