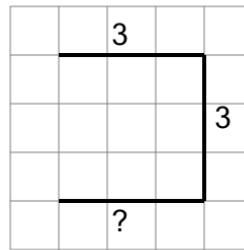




Math worksheet on 'Length of a Line on a Grid - 3 Segment, 2 Labelled (Regular) - To Length (Level 1)'. Part of a broader unit on 'Perimeter Intro'

Learn online: app.mobius.academy/math/units/perimeter_intro/

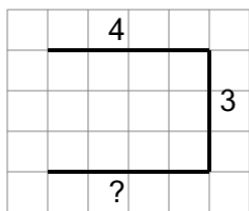
1



Find the length of the line on this grid of 1x1 squares

a	8	b	5
c	9	d	1
e	2	f	15

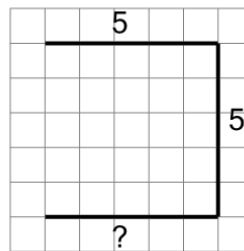
2



Find the length of the line on this grid of 1x1 squares

a	2	b	14
c	9	d	8
e	11	f	19

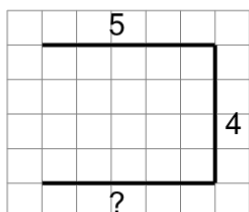
3



Find the length of the line on this grid of 1x1 squares

a	21	b	15
c	9	d	16
e	11	f	5

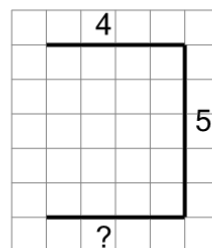
4



Find the length of the line on this grid of 1x1 squares

a	23	b	13
c	20	d	14
e	4	f	19

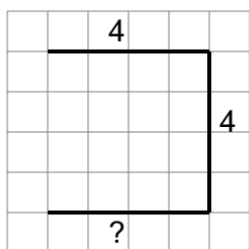
5



Find the length of the line on this grid of 1x1 squares

a	16	b	13
c	8	d	5
e	17	f	21

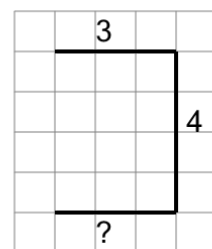
6



Find the length of the line on this grid of 1x1 squares

a	7	b	3
c	12	d	17
e	20	f	5

7



Find the length of the line on this grid of 1x1 squares

a	10	b	14
c	18	d	16
e	9	f	19