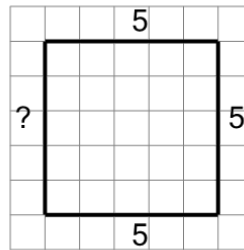




Math worksheet on 'Length of a Line on a Grid - 4 Segment, 3 Labelled (Regular) - To Length (Level 1)'. Part of a broader unit on 'Perimeter Intro'

Learn online: app.mobius.academy/math/units/perimeter_intro/

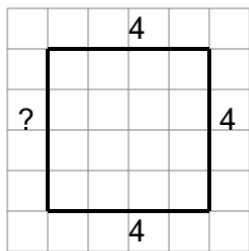
1



Find the length of the line on this grid of 1x1 squares

a	28	b	4
c	24	d	18
e	32	f	20

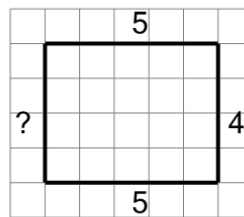
2



Find the length of the line on this grid of 1x1 squares

a	10	b	9
c	7	d	16
e	18	f	23

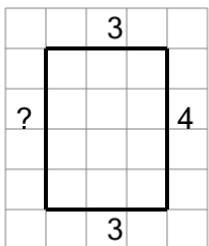
3



Find the length of the line on this grid of 1x1 squares

a	8	b	17
c	25	d	15
e	9	f	18

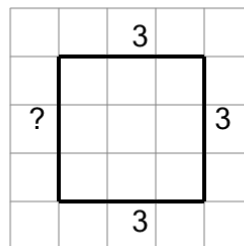
4



Find the length of the line on this grid of 1x1 squares

a	14	b	16
c	5	d	4
e	22	f	20

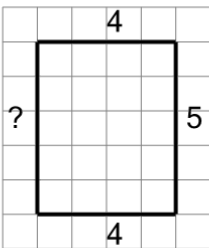
5



Find the length of the line on this grid of 1x1 squares

a	9	b	5
c	12	d	21
e	2	f	7

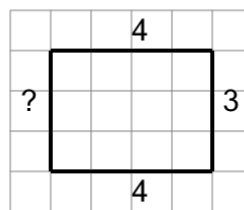
6



Find the length of the line on this grid of 1x1 squares

a	10	b	12
c	9	d	8
e	18	f	15

7



Find the length of the line on this grid of 1x1 squares

a	14	b	23
c	18	d	9
e	12	f	10