



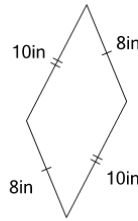
Math worksheet on 'Perimeter of a Parallelogram (Level 3)'. Part of a broader unit on 'Area and Perimeter Complex Shapes'

Learn online:

app.mobius.academy/math/units/area_and_perimeter_complex_shapes/

1

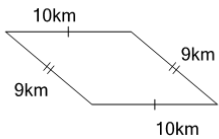
Find the perimeter of the parallelogram



a	22in	b	36in
c	23in	d	45in
e	13in	f	27in

2

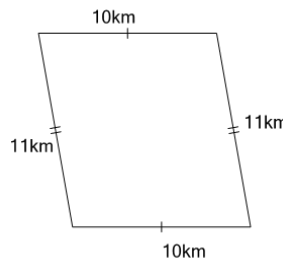
Find the perimeter of the parallelogram



a	14km	b	24km
c	90km	d	48km
e	29km	f	38km

3

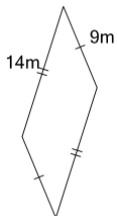
Find the perimeter of the parallelogram



a	32km	b	26km
c	53km	d	110km
e	42km	f	16km

4

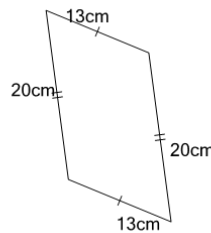
Find the perimeter of the parallelogram



a	58m	b	27m
c	18m	d	29m
e	126m	f	46m

5

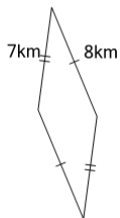
Find the perimeter of the parallelogram



a	260cm	b	38cm
c	28cm	d	83cm
e	50cm	f	66cm

6

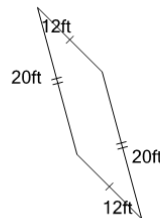
Find the perimeter of the parallelogram



a	20km	b	18km
c	10km	d	30km
e	21km	f	38km

7

Find the perimeter of the parallelogram



a	39ft	b	80ft
c	38ft	d	37ft
e	48ft	f	64ft