

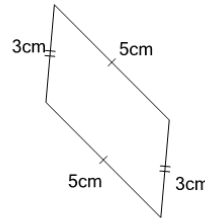


Math worksheet on 'Perimeter of a Parallelogram - Concept Intro (Level 1)'. Part of a broader unit on 'Area and Perimeter Basic Shapes'

Learn online: app.mobius.academy/math/units/area_and_perimeter_basic_shapes/

1

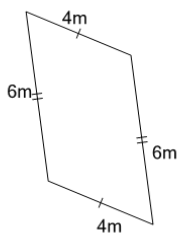
Find the total length of all 4 sides of this parallelogram



a	11cm	b	3cm
c	12cm	d	20cm
e	10cm	f	16cm

2

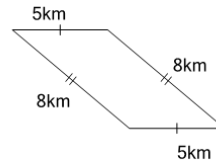
Find the total length of all 4 sides of this parallelogram



a	15m	b	25m
c	24m	d	20m
e	5m	f	16m

3

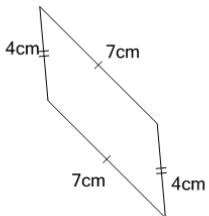
Find the total length of all 4 sides of this parallelogram



a	26km	b	18km
c	8km	d	40km
e	33km	f	21km

4

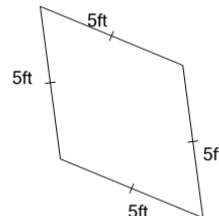
Find the total length of all 4 sides of this parallelogram



a	17cm	b	15cm
c	22cm	d	28cm
e	16cm	f	6cm

5

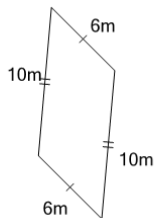
Find the total length of all 4 sides of this parallelogram



a	5ft	b	15ft
c	25ft	d	20ft
e	16ft		

6

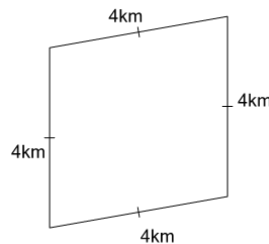
Find the total length of all 4 sides of this parallelogram



a	11m	b	60m
c	32m	d	21m
e	19m	f	40m

7

Find the total length of all 4 sides of this parallelogram



a	3km	b	14km
c	20km	d	16km
e	12km	f	13km