

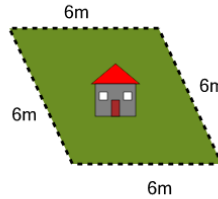


Math worksheet on 'Perimeter of a Parallelogram - Picture Intro (Level 1)'. Part of a broader unit on 'Area and Perimeter Basic Shapes'

Learn online: app.mobius.academy/math/units/area_and_perimeter_basic_shapes/

1

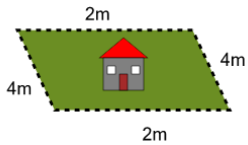
How long is the fence around this yard?



| | | | |
|----------|-----|----------|-----|
| a | 20m | b | 24m |
| c | 40m | d | 18m |
| e | 8m | f | 30m |

2

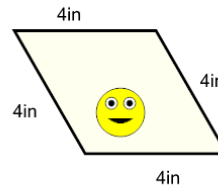
How long is the fence around this yard?



| | | | |
|----------|-----|----------|-----|
| a | 8m | b | 13m |
| c | 7m | d | 12m |
| e | 10m | f | 3m |

3

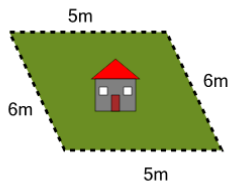
How long is the border around the outside of this painting?



| | | | |
|----------|------|----------|------|
| a | 23in | b | 20in |
| c | 15in | d | 10in |
| e | 18in | f | 16in |

4

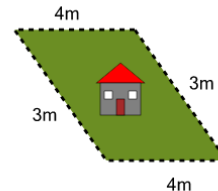
How long is the fence around this yard?



| | | | |
|----------|-----|----------|-----|
| a | 32m | b | 22m |
| c | 12m | d | 16m |
| e | 26m | f | 30m |

5

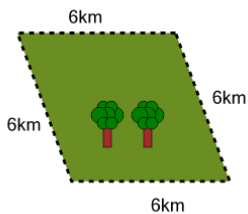
How long is the fence around this yard?



| | | | |
|----------|-----|----------|-----|
| a | 6m | b | 14m |
| c | 12m | d | 8m |
| e | 10m | f | 9m |

6

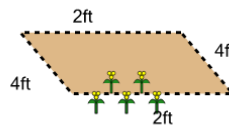
How far is it to run around the outside of this park?



| | | | |
|----------|------|----------|------|
| a | 12km | b | 22km |
| c | 28km | d | 38km |
| e | 18km | f | 24km |

7

How long is the fence around this garden?



| | | | |
|----------|------|----------|------|
| a | 12ft | b | 7ft |
| c | 11ft | d | 20ft |
| e | 16ft | f | 19ft |