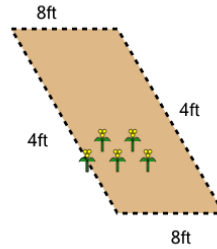




Math worksheet on 'Perimeter of a Parallelogram - Picture Intro (Level 2)'. Part of a broader unit on 'Perimeter Intro'

Learn online: app.mobius.academy/math/units/perimeter_intro/

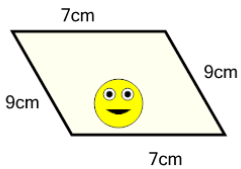
1



How long is the fence around this garden?

a	4ft	b	32ft
c	24ft	d	34ft
e	28ft	f	38ft

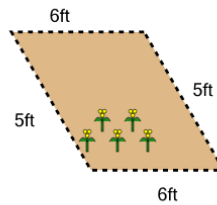
2



How long is the border around the outside of this painting?

a	32cm	b	44cm
c	56cm	d	2cm
e	5cm	f	50cm

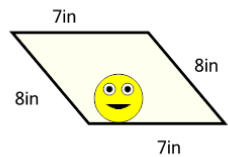
3



How long is the fence around this garden?

a	8ft	b	22ft
c	10ft	d	36ft
e	12ft	f	2ft

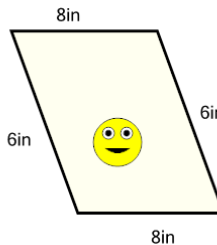
4



How long is the border around the outside of this painting?

a	30in	b	57in
c	54in	d	9in
e	42in	f	39in

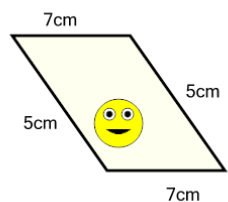
5



How long is the border around the outside of this painting?

a	22in	b	28in
c	24in	d	32in
e	26in	f	14in

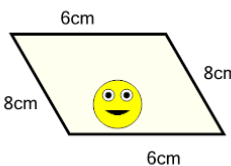
6



How long is the border around the outside of this painting?

a	12cm	b	16cm
c	30cm	d	24cm
e	26cm	f	36cm

7



How long is the border around the outside of this painting?

a	28cm	b	12cm
c	8cm	d	32cm
e	22cm	f	36cm