

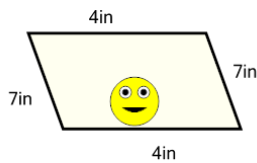


Math worksheet on 'Perimeter of a Parallelogram - Picture Intro (Level 3)'. Part of a broader unit on 'Perimeter Intro'

Learn online: app.mobius.academy/math/units/perimeter_intro/

1

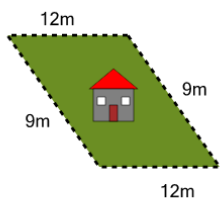
How long is the border around the outside of this painting?



a	24in	b	8in
c	4in	d	20in
e	38in	f	22in

2

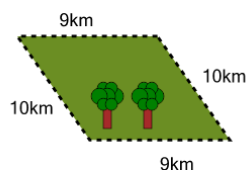
How long is the fence around this yard?



a	6m	b	42m
c	18m	d	58m
e	38m	f	2m

3

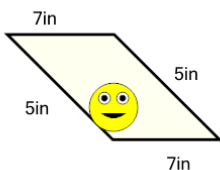
How far is it to run around the outside of this park?



a	17km	b	11km
c	35km	d	29km
e	62km	f	38km

4

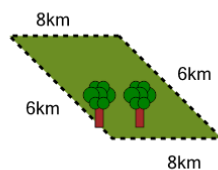
How long is the border around the outside of this painting?



a	8in	b	38in
c	20in	d	36in
e	24in	f	28in

5

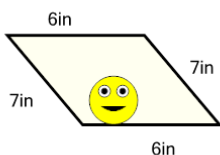
How far is it to run around the outside of this park?



a	14km	b	12km
c	16km	d	24km
e	28km	f	26km

6

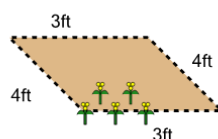
How long is the border around the outside of this painting?



a	30in	b	40in
c	6in	d	26in
e	34in	f	14in

7

How long is the fence around this garden?



a	9ft	b	15ft
c	11ft	d	14ft
e	19ft	f	23ft