

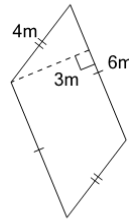


Math worksheet on 'Perimeter of a Parallelogram - With Distraction (Level 1)'. Part of a broader unit on 'Area and Perimeter Complex Shapes'

Learn online:

[app.mobius.academy/math/units/area\\_and\\_perimeter\\_complex\\_shapes/](http://app.mobius.academy/math/units/area_and_perimeter_complex_shapes/)

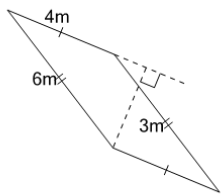
1



Find the perimeter of the parallelogram

|          |     |          |     |
|----------|-----|----------|-----|
| <b>a</b> | 16m | <b>b</b> | 15m |
| <b>c</b> | 13m | <b>d</b> | 20m |
| <b>e</b> | 25m | <b>f</b> | 14m |

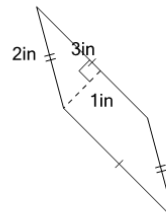
2



Find the perimeter of the parallelogram

|          |     |          |     |
|----------|-----|----------|-----|
| <b>a</b> | 24m | <b>b</b> | 12m |
| <b>c</b> | 20m | <b>d</b> | 5m  |
| <b>e</b> | 15m | <b>f</b> | 25m |

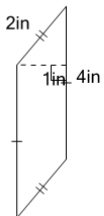
3



Find the perimeter of the parallelogram

|          |      |          |     |
|----------|------|----------|-----|
| <b>a</b> | 12in | <b>b</b> | 7in |
| <b>c</b> | 13in | <b>d</b> | 6in |
| <b>e</b> | 10in | <b>f</b> | 9in |

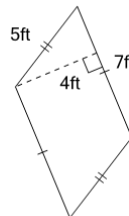
4



Find the perimeter of the parallelogram

|          |     |          |      |
|----------|-----|----------|------|
| <b>a</b> | 9in | <b>b</b> | 12in |
| <b>c</b> | 8in | <b>d</b> | 15in |
| <b>e</b> | 1in | <b>f</b> | 11in |

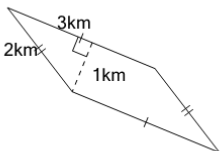
5



Find the perimeter of the parallelogram

|          |      |          |      |
|----------|------|----------|------|
| <b>a</b> | 16ft | <b>b</b> | 24ft |
| <b>c</b> | 30ft | <b>d</b> | 15ft |
| <b>e</b> | 17ft | <b>f</b> | 19ft |

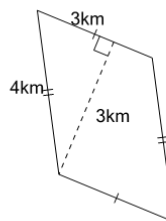
6



Find the perimeter of the parallelogram

|          |      |          |      |
|----------|------|----------|------|
| <b>a</b> | 0km  | <b>b</b> | 13km |
| <b>c</b> | 11km | <b>d</b> | 10km |
| <b>e</b> | 6km  | <b>f</b> | 8km  |

7



Find the perimeter of the parallelogram

|          |      |          |      |
|----------|------|----------|------|
| <b>a</b> | 2km  | <b>b</b> | 13km |
| <b>c</b> | 14km | <b>d</b> | 11km |
| <b>e</b> | 18km | <b>f</b> | 12km |