



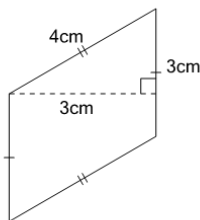
Math worksheet on 'Perimeter of a Parallelogram - With Distraction (Level 2)'. Part of a broader unit on 'Area and Perimeter Complex Shapes'

Learn online:

app.mobius.academy/math/units/area_and_perimeter_complex_shapes/

1

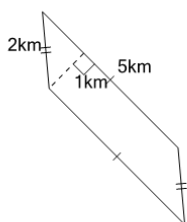
Find the perimeter of the parallelogram



a	12cm	b	18cm
c	14cm	d	2cm
e	11cm		

2

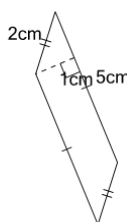
Find the perimeter of the parallelogram



a	13km	b	18km
c	12km	d	2km
e	11km	f	14km

3

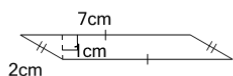
Find the perimeter of the parallelogram



a	12cm	b	2cm
c	11cm	d	18cm
e	10cm	f	14cm

4

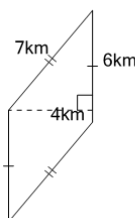
Find the perimeter of the parallelogram



a	11cm	b	18cm
c	4cm	d	23cm
e	14cm		

5

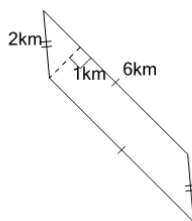
Find the perimeter of the parallelogram



a	42km	b	33km
c	20km	d	18km
e	26km	f	8km

6

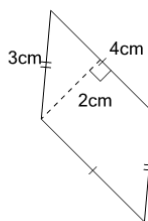
Find the perimeter of the parallelogram



a	13km	b	16km
c	12km	d	11km
e	3km	f	20km

7

Find the perimeter of the parallelogram



a	12cm	b	18cm
c	2cm	d	14cm
e	11cm	f	13cm