

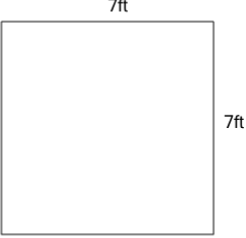


Math worksheet on 'Perimeter of a Rectangle (Level 2)'. Part of a broader unit on 'Area and Perimeter Basic Shapes'

Learn online: app.mobius.academy/math/units/area_and_perimeter_basic_shapes/

1


Find the perimeter



a	42ft	b	28ft
c	98ft	d	36ft
e	49ft	f	14ft

2


Find the perimeter



a	26km	b	9km
c	14km	d	28km
e	18km		

3


Find the perimeter



a	28ft	b	8ft
c	22ft	d	18ft
e	40ft	f	9ft

4

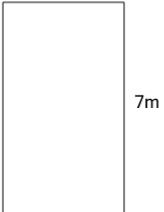
Find the perimeter



a	28cm	b	9cm
c	22cm	d	26cm
e	14cm	f	18cm

5


Find the perimeter



a	22m	b	26m
c	38m	d	56m
e	30m	f	11m

6


Find the perimeter



a	24cm	b	22cm
c	11cm	d	38cm
e	32cm	f	48cm

7

Find the perimeter



a	26m	b	24m
c	34m	d	6m
e	48m	f	22m