

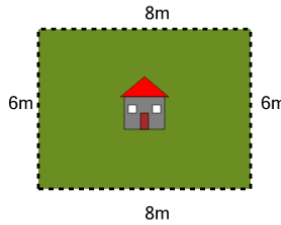


Math worksheet on 'Perimeter of a Rectangle - Picture Intro (Level 2)'. Part of a broader unit on 'Area and Perimeter Basic Shapes'

Learn online: app.mobius.academy/math/units/area_and_perimeter_basic_shapes/

1

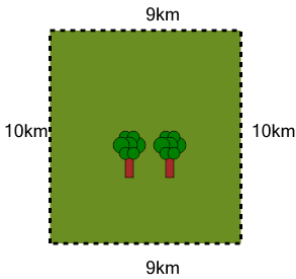
How long is the fence around this yard?



a	28m	b	34m
c	38m	d	36m
e	42m	f	30m

2

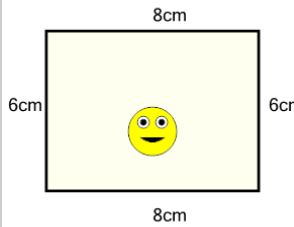
How far is it to run around the outside of this park?



a	29km	b	41km
c	53km	d	59km
e	38km	f	23km

3

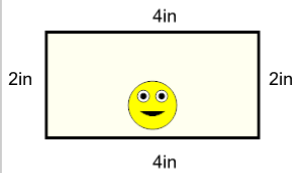
How long is the border around the outside of this painting?



a	36cm	b	10cm
c	22cm	d	28cm
e	44cm	f	16cm

4

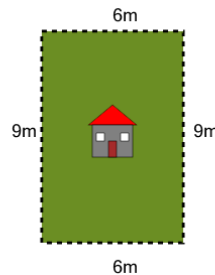
How long is the border around the outside of this painting?



a	4in	b	14in
c	10in	d	12in
e	21in	f	3in

5

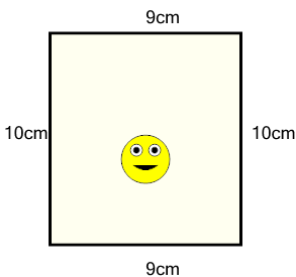
How long is the fence around this yard?



a	39m	b	42m
c	30m	d	21m
e	9m	f	3m

6

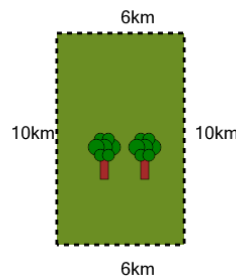
How long is the border around the outside of this painting?



a	32cm	b	14cm
c	38cm	d	44cm
e	8cm	f	50cm

7

How far is it to run around the outside of this park?



a	56km	b	38km
c	32km	d	2km
e	35km	f	14km