

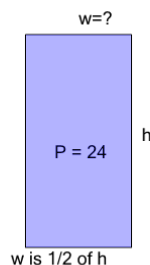


Math worksheet on 'Perimeter of a Rectangle - Side from Perimeter and Side Ratio (Fractional) (Level 1)'. Part of a broader unit on 'Area and Perimeter Logic - Practice'

Learn online:

app.mobius.academy/math/units/area_and_perimeter_geometry_logic_practice/

1

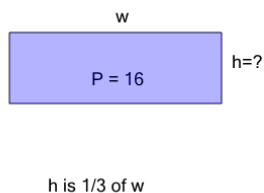


Find the missing side length of this rectangle

a	1	b	12
c	4	d	6
e	2	f	11

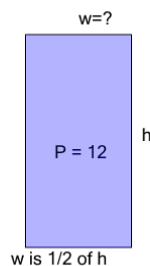
2

Find the missing side length of this rectangle



a	7	b	5
c	2	d	3
e	1	f	6

3

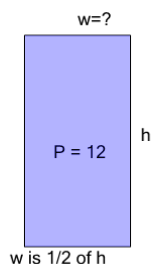


Find the missing side length of this rectangle

a	5	b	11
c	6	d	2
e	1	f	7

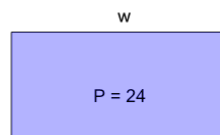
4

Find the missing side length of this rectangle



a	5	b	6
c	9	d	2
e	11	f	8

5

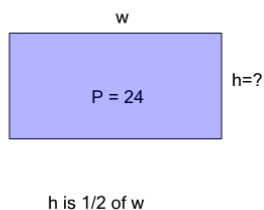


Find the missing side length of this rectangle

a	4	b	2
c	9	d	5
e	10	f	6

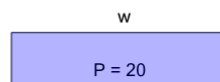
6

Find the missing side length of this rectangle



a	10	b	9
c	11	d	12
e	4	f	3

7



Find the missing side length of this rectangle

a	7	b	2
c	5	d	3
e	9	f	8