

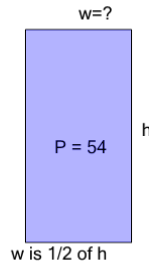


Math worksheet on 'Perimeter of a Rectangle - Side from Perimeter and Side Ratio (Fractional) (Level 3)'. Part of a broader unit on 'Area and Perimeter Logic - Practice'

Learn online:

app.mobius.academy/math/units/area_and_perimeter_geometry_logic_practice/

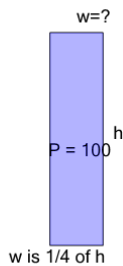
1



Find the missing side length of this rectangle

a	9	b	11
c	18	d	2
e	4	f	12

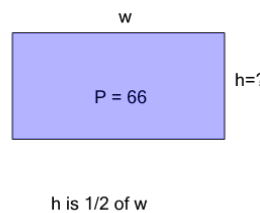
2



Find the missing side length of this rectangle

a	2	b	5
c	13	d	12
e	7	f	10

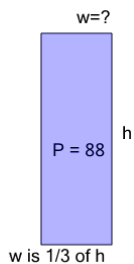
3



Find the missing side length of this rectangle

a	5	b	15
c	11	d	7
e	10	f	3

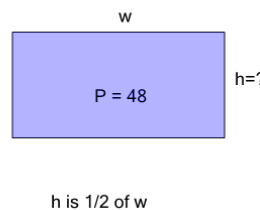
4



Find the missing side length of this rectangle

a	20	b	6
c	18	d	11
e	17	f	19

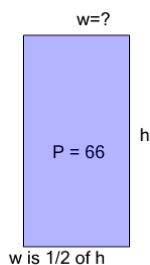
5



Find the missing side length of this rectangle

a	17	b	11
c	14	d	2
e	8	f	1

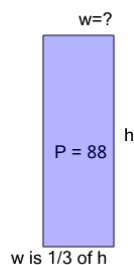
6



Find the missing side length of this rectangle

a	19	b	12
c	10	d	4
e	11	f	5

7



Find the missing side length of this rectangle

a	11	b	5
c	1	d	13
e	18	f	9