



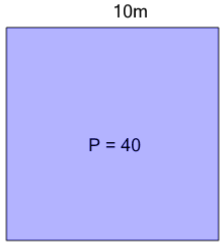
Math worksheet on 'Perimeter of a Rectangle - Side from Perimeter and Side (Level 3)'. Part of a broader unit on 'Area and Perimeter Logic - Practice'

Learn online:

app.mobius.academy/math/units/area_and_perimeter_geometry_logic_practice/

1

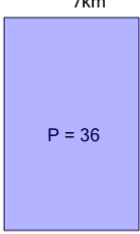
Find the missing side length of this rectangle



a	18m	b	5m
c	10m	d	13m
e	14m	f	19m

2

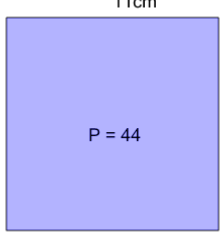
Find the missing side length of this rectangle



a	20km	b	19km
c	4km	d	1km
e	16km	f	11km

3

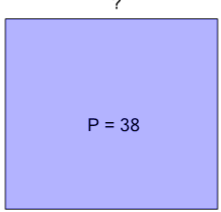
Find the missing side length of this rectangle



a	16cm	b	19cm
c	10cm	d	15cm
e	20cm	f	11cm

4

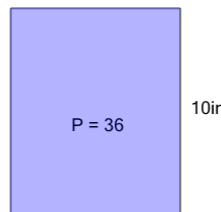
Find the missing side length of this rectangle



a	10m	b	17m
c	5m	d	12m
e	16m	f	14m

5

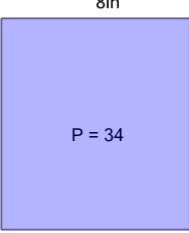
Find the missing side length of this rectangle



a	1in	b	2in
c	8in	d	7in
e	14in	f	3in

6

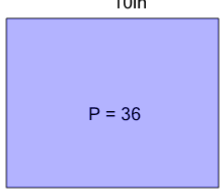
Find the missing side length of this rectangle



a	9in	b	15in
c	10in	d	13in
e	2in	f	12in

7

Find the missing side length of this rectangle



a	3in	b	4in
c	17in	d	11in
e	8in	f	2in