



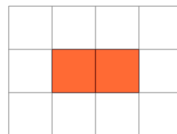
Math worksheet on 'Perimeter of a Shape on a Grid - Longest Perimeter, Irregular Shape (Level 1)'. Part of a broader unit on 'Perimeter Practice'

Learn online: app.mobius.academy/math/units/perimeter_practice/

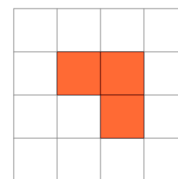
1

Which shape on the 1x1 grid has the longest perimeter?

a



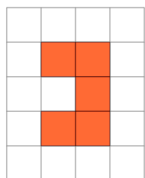
b



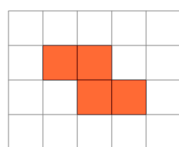
2

Which shape on the 1x1 grid has the longest perimeter?

a



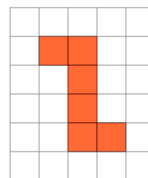
b



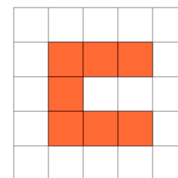
3

Which shape on the 1x1 grid has the longest perimeter?

a



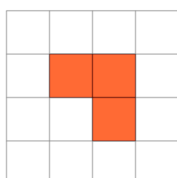
b



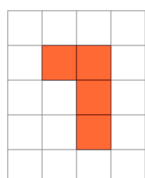
4

Which shape on the 1x1 grid has the longest perimeter?

a



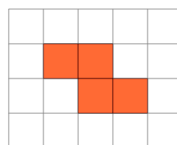
b



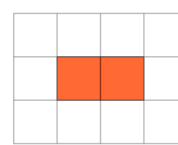
5

Which shape on the 1x1 grid has the longest perimeter?

a



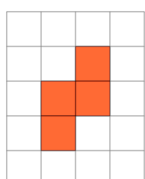
b



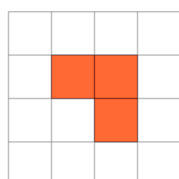
6

Which shape on the 1x1 grid has the longest perimeter?

a



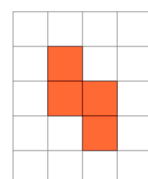
b



7

Which shape on the 1x1 grid has the longest perimeter?

a



b

