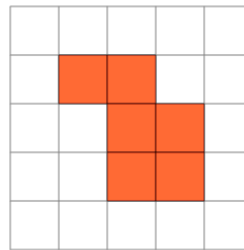




Math worksheet on 'Perimeter of a Shape on a Grid - Irregular Shape to Perimeter (Level 1)'. Part of a broader unit on 'Area and Perimeter Basic Shapes'

Learn online: app.mobius.academy/math/units/area_and_perimeter_basic_shapes/

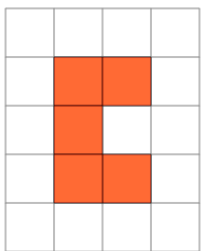
1



Find the perimeter of the shape on this grid of 1x1 squares

a	17	b	10
c	3	d	12
e	13	f	8

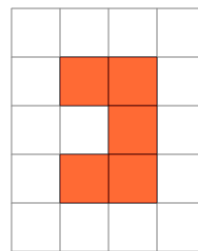
2



Find the perimeter of the shape on this grid of 1x1 squares

a	3	b	12
c	15	d	14
e	6	f	11

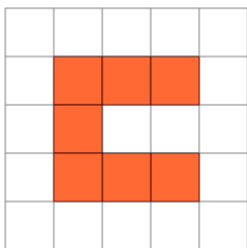
3



Find the perimeter of the shape on this grid of 1x1 squares

a	4	b	6
c	12	d	3
e	20	f	16

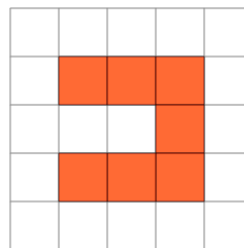
4



Find the perimeter of the shape on this grid of 1x1 squares

a	15	b	16
c	13	d	12
e	10	f	17

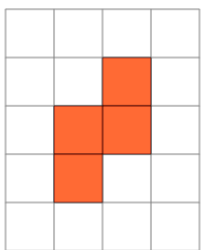
5



Find the perimeter of the shape on this grid of 1x1 squares

a	6	b	16
c	15	d	25
e	21	f	17

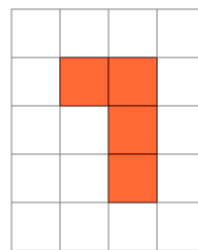
6



Find the perimeter of the shape on this grid of 1x1 squares

a	11	b	18
c	3	d	10
e	17	f	14

7



Find the perimeter of the shape on this grid of 1x1 squares

a	13	b	10
c	15	d	14
e	6	f	9