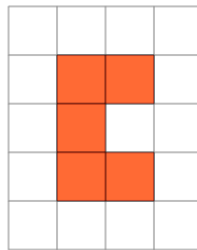




Math worksheet on 'Perimeter of a Shape on a Grid - Irregular Shape to Perimeter (Level 2)'. Part of a broader unit on 'Area and Perimeter Basic Shapes'

Learn online: app.mobius.academy/math/units/area_and_perimeter_basic_shapes/

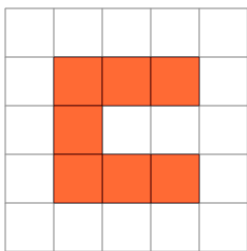
1



Find the perimeter of the shape on this grid of 1x1 squares

a	13	b	10
c	11	d	16
e	5	f	12

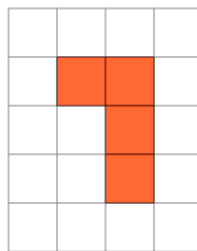
2



Find the perimeter of the shape on this grid of 1x1 squares

a	11	b	15
c	19	d	21
e	18	f	16

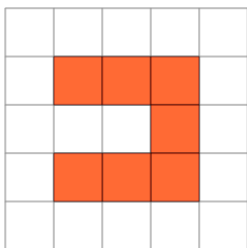
3



Find the perimeter of the shape on this grid of 1x1 squares

a	7	b	10
c	4	d	9
e	17	f	14

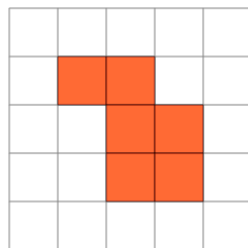
4



Find the perimeter of the shape on this grid of 1x1 squares

a	24	b	10
c	16	d	17
e	19	f	12

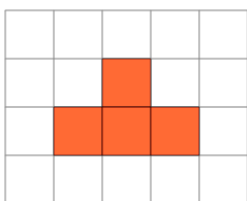
5



Find the perimeter of the shape on this grid of 1x1 squares

a	6	b	12
c	7	d	11
e	17	f	15

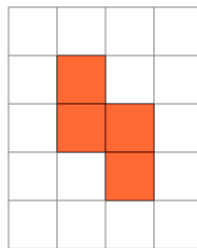
6



Find the perimeter of the shape on this grid of 1x1 squares

a	10	b	12
c	15	d	4
e	5	f	1

7



Find the perimeter of the shape on this grid of 1x1 squares

a	19	b	17
c	2	d	6
e	15	f	10