



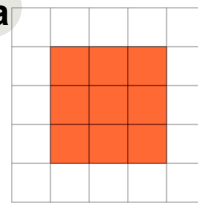
Math worksheet on 'Perimeter of a Shape on a Grid - Perimeter to Rectangle Shape (Level 1)'. Part of a broader unit on 'Perimeter Practice'

Learn online: [app.mobius.academy/math/units/perimeter\\_practice/](http://app.mobius.academy/math/units/perimeter_practice/)

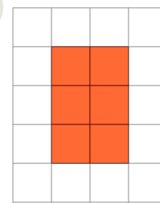
1

Find the shape that has a perimeter of 10 on the grid of 1x1 squares

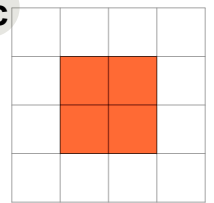
a



b



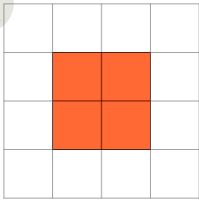
c



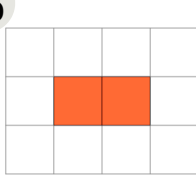
2

Find the shape that has a perimeter of 10 on the grid of 1x1 squares

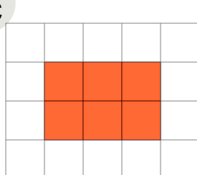
a



b



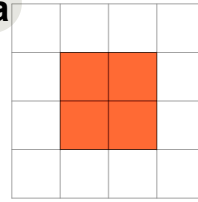
c



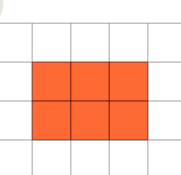
3

Find the shape that has a perimeter of 8 on the grid of 1x1 squares

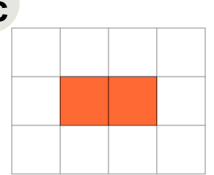
a



b



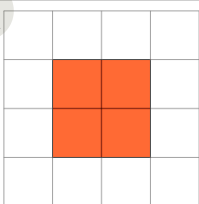
c



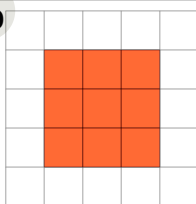
4

Find the shape that has a perimeter of 12 on the grid of 1x1 squares

a



b



c

