

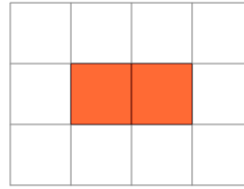


Math worksheet on 'Perimeter of a Shape on a Grid - Rectangle Shape to Perimeter (Level 1)'. Part of a broader unit on 'Perimeter Intro'

Learn online: app.mobius.academy/math/units/perimeter_intro/

1

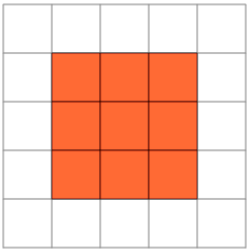
Find the perimeter of the shape on this grid of 1x1 squares



a	6	b	3
c	10	d	1
e	7	f	15

2

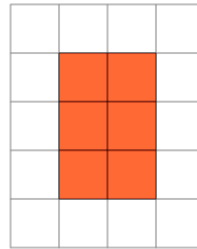
Find the perimeter of the shape on this grid of 1x1 squares



a	12	b	14
c	15	d	11
e	13	f	5

3

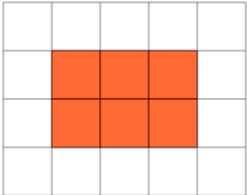
Find the perimeter of the shape on this grid of 1x1 squares



a	8	b	13
c	10	d	17
e	9	f	19

4

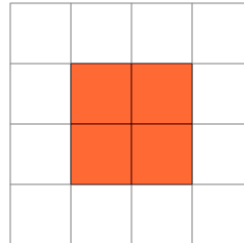
Find the perimeter of the shape on this grid of 1x1 squares



a	18	b	7
c	11	d	4
e	10	f	3

5

Find the perimeter of the shape on this grid of 1x1 squares



a	7	b	15
c	1	d	2
e	11	f	8