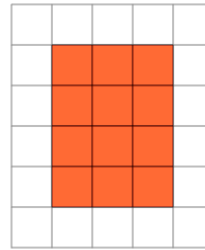




Math worksheet on 'Perimeter of a Shape on a Grid - Rectangle Shape to Perimeter (Level 2)'. Part of a broader unit on 'Area and Perimeter Basic Shapes'

Learn online: app.mobius.academy/math/units/area_and_perimeter_basic_shapes/

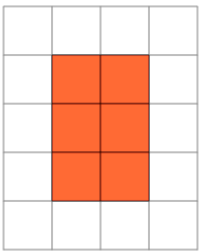
1



Find the perimeter of the shape on this grid of 1x1 squares

a	16	b	14
c	10	d	4
e	22	f	12

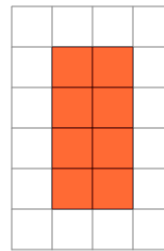
2



Find the perimeter of the shape on this grid of 1x1 squares

a	10	b	14
c	4	d	18
e	13	f	5

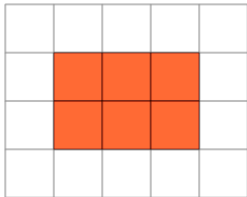
3



Find the perimeter of the shape on this grid of 1x1 squares

a	7	b	11
c	14	d	4
e	12	f	5

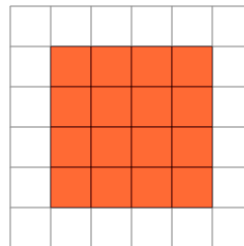
4



Find the perimeter of the shape on this grid of 1x1 squares

a	17	b	8
c	2	d	10
e	12	f	14

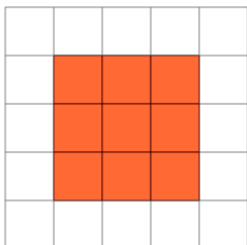
5



Find the perimeter of the shape on this grid of 1x1 squares

a	16	b	18
c	12	d	9
e	21	f	15

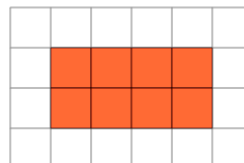
6



Find the perimeter of the shape on this grid of 1x1 squares

a	12	b	13
c	20	d	16
e	7	f	2

7



Find the perimeter of the shape on this grid of 1x1 squares

a	20	b	3
c	6	d	14
e	15	f	12