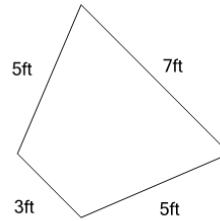




Math worksheet on 'Perimeter of a Trapezoid (Level 1)'. Part of a broader unit on 'Perimeter Intro'

Learn online: app.mobius.academy/math/units/perimeter_intro/

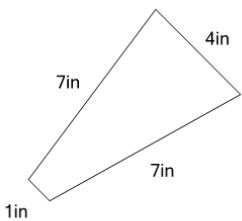
1



Find the perimeter of the trapezoid

a	26ft	b	16ft
c	12ft	d	20ft
e	24ft	f	14ft

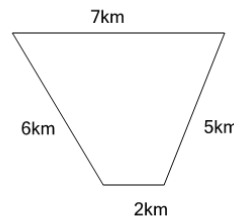
2



Find the perimeter of the trapezoid

a	19in	b	11in
c	21in	d	10in
e	13in	f	15in

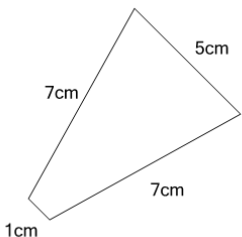
3



Find the perimeter of the trapezoid

a	10km	b	16km
c	18km	d	20km
e	12km	f	24km

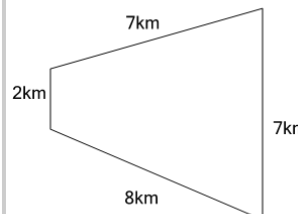
4



Find the perimeter of the trapezoid

a	24cm	b	20cm
c	18cm	d	26cm
e	16cm	f	28cm

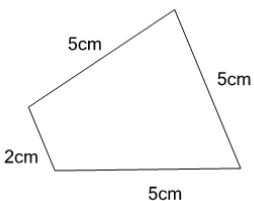
5



Find the perimeter of the trapezoid

a	17km	b	19km
c	14km	d	26km
e	24km	f	31km

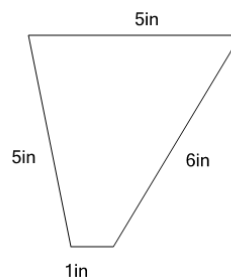
6



Find the perimeter of the trapezoid

a	17cm	b	9cm
c	20cm	d	24cm
e	10cm	f	15cm

7



Find the perimeter of the trapezoid

a	24in	b	14in
c	17in	d	20in
e	9in	f	22in