

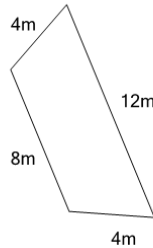


Math worksheet on 'Perimeter of a Trapezoid - Concept Intro (Level 1)'. Part of a broader unit on 'Area and Perimeter Basic Shapes'

Learn online: app.mobius.academy/math/units/area_and_perimeter_basic_shapes/

1

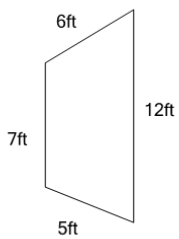
Find the total length of all 4 sides of this trapezoid



a	22m	b	39m
c	14m	d	28m
e	17m	f	20m

2

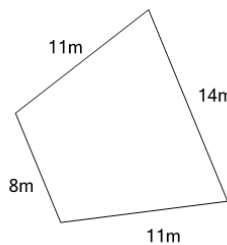
Find the total length of all 4 sides of this trapezoid



a	42ft	b	21ft
c	27ft	d	30ft
e	33ft	f	18ft

3

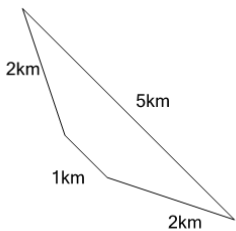
Find the total length of all 4 sides of this trapezoid



a	26m	b	62m
c	53m	d	44m
e	40m	f	35m

4

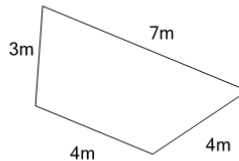
Find the total length of all 4 sides of this trapezoid



a	7km	b	9km
c	13km	d	11km
e	10km	f	14km

5

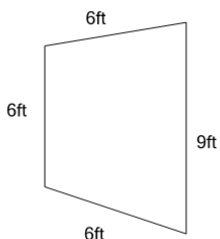
Find the total length of all 4 sides of this trapezoid



a	18m	b	20m
c	11m	d	9m
e	22m	f	25m

6

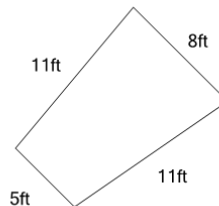
Find the total length of all 4 sides of this trapezoid



a	24ft	b	16ft
c	27ft	d	30ft
e	22ft	f	19ft

7

Find the total length of all 4 sides of this trapezoid



a	46ft	b	28ft
c	39ft	d	49ft
e	21ft	f	35ft