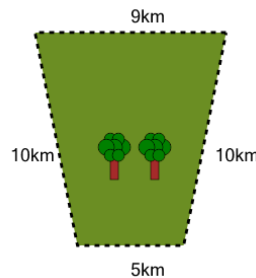




Math worksheet on 'Perimeter of a Trapezoid - Picture Intro (Level 2)'. Part of a broader unit on 'Area and Perimeter Basic Shapes'

Learn online: app.mobius.academy/math/units/area_and_perimeter_basic_shapes/

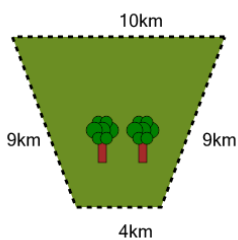
1



How far is it to run around the outside of this park?

a	4km	b	7km
c	46km	d	13km
e	61km	f	34km

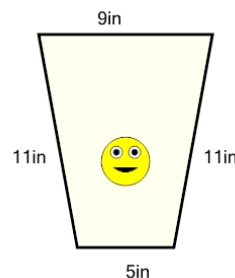
2



How far is it to run around the outside of this park?

a	47km	b	35km
c	41km	d	38km
e	32km	f	56km

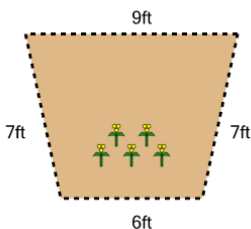
3



How long is the border around the outside of this painting?

a	60in	b	54in
c	36in	d	57in
e	12in	f	6in

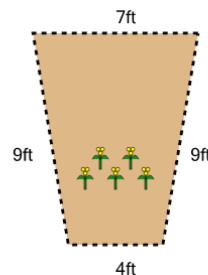
4



How long is the fence around this garden?

a	13ft	b	11ft
c	19ft	d	29ft
e	31ft	f	23ft

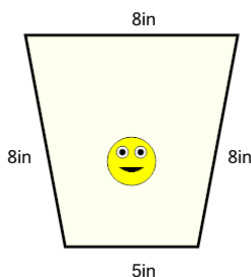
5



How long is the fence around this garden?

a	21ft	b	29ft
c	19ft	d	25ft
e	45ft	f	35ft

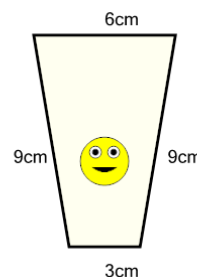
6



How long is the border around the outside of this painting?

a	25in	b	43in
c	21in	d	29in
e	41in	f	19in

7



How long is the border around the outside of this painting?

a	17cm	b	23cm
c	43cm	d	27cm
e	35cm	f	31cm