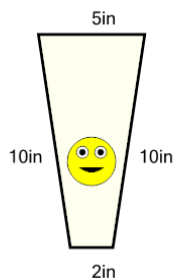




Math worksheet on 'Perimeter of a Trapezoid - Picture Intro (Level 3)'. Part of a broader unit on 'Perimeter Intro'

Learn online: app.mobius.academy/math/units/perimeter_intro/

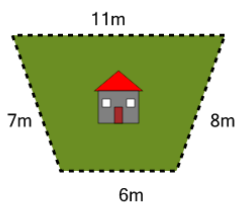
1



How long is the border around the outside of this painting?

a	35in	b	41in
c	7in	d	23in
e	43in	f	27in

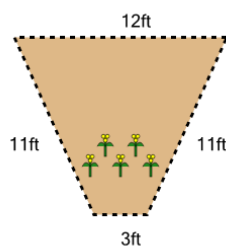
2



How long is the fence around this yard?

a	56m	b	32m
c	23m	d	14m
e	26m	f	53m

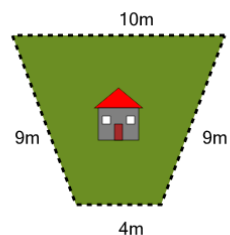
3



How long is the fence around this garden?

a	61ft	b	10ft
c	16ft	d	37ft
e	58ft	f	19ft

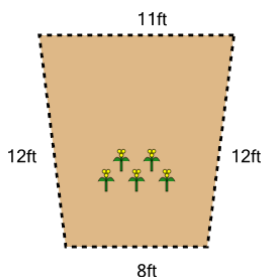
4



How long is the fence around this yard?

a	32m	b	8m
c	38m	d	35m
e	59m	f	29m

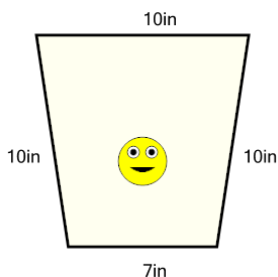
5



How long is the fence around this garden?

a	43ft	b	51ft
c	47ft	d	35ft
e	19ft	f	27ft

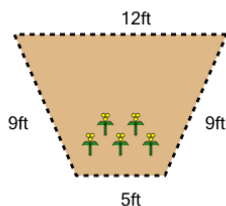
6



How long is the border around the outside of this painting?

a	7in	b	64in
c	61in	d	40in
e	31in	f	37in

7



How long is the fence around this garden?

a	35ft	b	59ft
c	41ft	d	5ft
e	47ft	f	29ft