

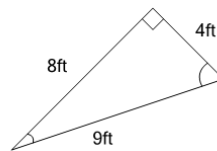


Math worksheet on 'Perimeter of a Triangle - Concept Intro (Level 1)'. Part of a broader unit on 'Perimeter Intro'

Learn online: app.mobius.academy/math/units/perimeter_intro/

1

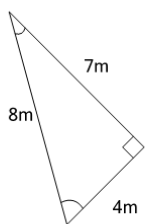
Find the total length of all 3 sides of this triangle



a	25ft	b	13ft
c	38ft	d	29ft
e	21ft	f	4ft

2

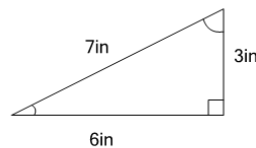
Find the total length of all 3 sides of this triangle



a	27m	b	23m
c	19m	d	8m
e	11m	f	30m

3

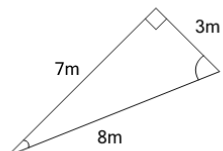
Find the total length of all 3 sides of this triangle



a	16in	b	29in
c	3in	d	6in
e	10in	f	26in

4

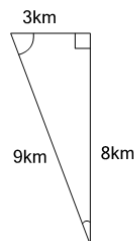
Find the total length of all 3 sides of this triangle



a	7m	b	29m
c	11m	d	32m
e	4m	f	18m

5

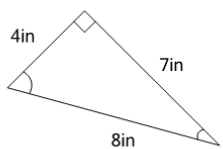
Find the total length of all 3 sides of this triangle



a	8km	b	12km
c	28km	d	20km
e	36km	f	24km

6

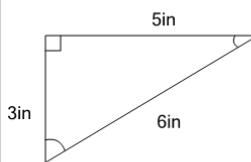
Find the total length of all 3 sides of this triangle



a	19in	b	30in
c	23in	d	4in
e	15in	f	11in

7

Find the total length of all 3 sides of this triangle



a	25in	b	20in
c	6in	d	17in
e	14in	f	8in