

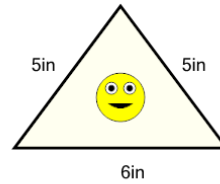


Math worksheet on 'Perimeter of a Triangle - Picture Intro (Level 1)'. Part of a broader unit on 'Area and Perimeter Basic Shapes'

Learn online: [app.mobius.academy/math/units/area\\_and\\_perimeter\\_basic\\_shapes/](http://app.mobius.academy/math/units/area_and_perimeter_basic_shapes/)

1

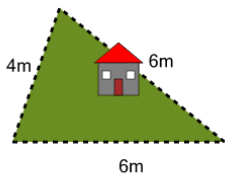
How long is the border around the outside of this painting?



<b>a</b>	11in	<b>b</b>	16in
<b>c</b>	14in	<b>d</b>	25in
<b>e</b>	13in	<b>f</b>	9in

2

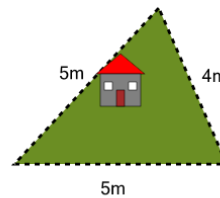
How long is the fence around this yard?



<b>a</b>	8m	<b>b</b>	16m
<b>c</b>	11m	<b>d</b>	21m
<b>e</b>	22m	<b>f</b>	23m

3

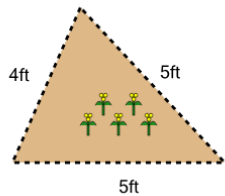
How long is the fence around this yard?



<b>a</b>	15m	<b>b</b>	4m
<b>c</b>	23m	<b>d</b>	12m
<b>e</b>	14m	<b>f</b>	22m

4

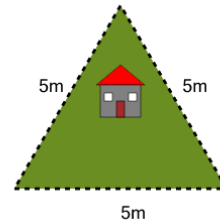
How long is the fence around this garden?



<b>a</b>	13ft	<b>b</b>	11ft
<b>c</b>	14ft	<b>d</b>	21ft
<b>e</b>	15ft	<b>f</b>	10ft

5

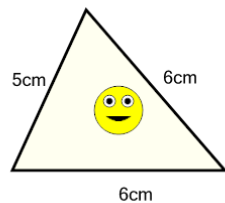
How long is the fence around this yard?



<b>a</b>	18m	<b>b</b>	15m
<b>c</b>	7m	<b>d</b>	8m
<b>e</b>	17m	<b>f</b>	6m

6

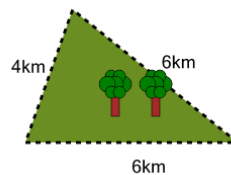
How long is the border around the outside of this painting?



<b>a</b>	25cm	<b>b</b>	11cm
<b>c</b>	18cm	<b>d</b>	17cm
<b>e</b>	12cm	<b>f</b>	13cm

7

How far is it to run around the outside of this park?



<b>a</b>	6km	<b>b</b>	17km
<b>c</b>	14km	<b>d</b>	16km
<b>e</b>	22km	<b>f</b>	25km