

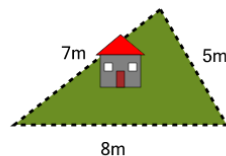


Math worksheet on 'Perimeter of a Triangle - Picture Intro (Level 2)'. Part of a broader unit on 'Perimeter Intro'

Learn online: app.mobius.academy/math/units/perimeter_intro/

1

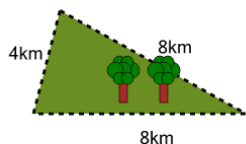
How long is the fence around this yard?



a	6m	b	16m
c	2m	d	22m
e	30m	f	20m

2

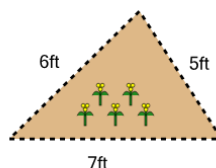
How far is it to run around the outside of this park?



a	10km	b	24km
c	32km	d	38km
e	22km	f	20km

3

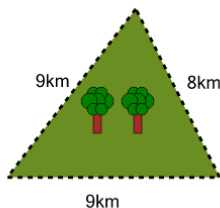
How long is the fence around this garden?



a	24ft	b	22ft
c	14ft	d	15ft
e	8ft	f	18ft

4

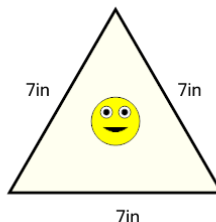
How far is it to run around the outside of this park?



a	22km	b	26km
c	36km	d	12km
e	14km	f	30km

5

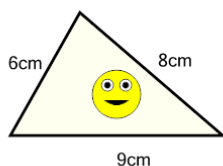
How long is the border around the outside of this painting?



a	21in	b	27in
c	25in	d	9in
e	19in	f	17in

6

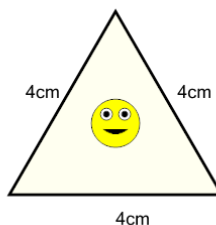
How long is the border around the outside of this painting?



a	23cm	b	13cm
c	17cm	d	33cm
e	3cm	f	39cm

7

How long is the border around the outside of this painting?



a	9cm	b	20cm
c	5cm	d	4cm
e	12cm	f	7cm