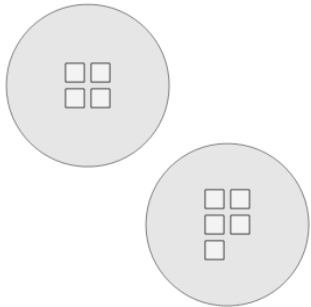




Math worksheet on 'Picture Numbers - Adding - Picture to Equation (Level 2)'. Part of a broader unit on 'Picture Numbers - Subtraction Intro'

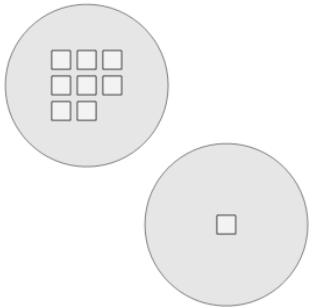
Learn online: app.mobius.academy/math/units/picture_numbers_subtraction_intro/

1 Choose the addition sentence for the white squares?



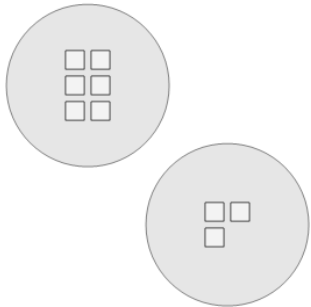
a $5 + 5$	b $4 + 5$	c $3 + 5$
d $7 + 5$	e $0 + 5$	f $4 + 2$

2 Choose the addition sentence for the white squares?



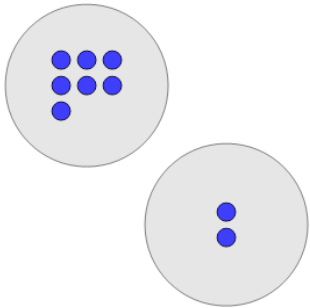
a $5 + 1$	b $8 + 4$
c $12 + 1$	d $8 + 0$
e $8 + 3$	f $8 + 1$

3 Choose the addition sentence for the white squares?



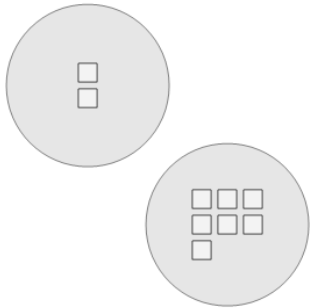
a $1 + 3$	b $10 + 3$
c $6 + 7$	d $8 + 3$
e $6 + 3$	f $6 + 2$

4 Choose the addition sentence for the blue circles?



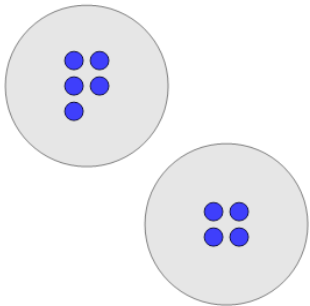
a $9 + 2$	b $8 + 2$
c $5 + 2$	d $11 + 2$
e $7 + 2$	f $7 + 1$

5 Choose the addition sentence for the white squares?



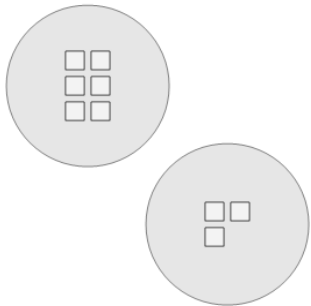
a $2 + 11$	b $1 + 7$
c $1 + 7$	d $2 + 9$
e $2 + 11$	f $2 + 7$

6 Choose the addition sentence for the blue circles?



a $7 + 4$	b $5 + 4$	c $5 + 0$
d $5 + 1$	e $5 + 1$	f $9 + 4$

7 Choose the addition sentence for the white squares?



a $3 + 3$	b $2 + 3$	c $6 + 3$
d $3 + 3$	e $6 + 1$	f $1 + 3$