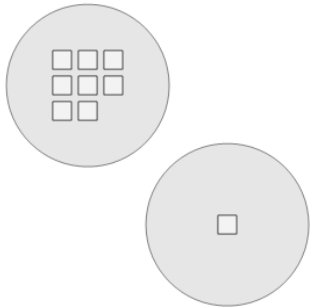




Math worksheet on 'Picture Numbers - Adding - Picture to Word (Level 2)'. Part of a broader unit on 'Picture Numbers - Subtraction Intro'

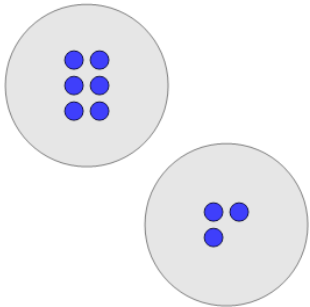
Learn online: [app.mobius.academy/math/units/picture\\_numbers\\_subtraction\\_intro/](http://app.mobius.academy/math/units/picture_numbers_subtraction_intro/)

**1** How many white squares are there?



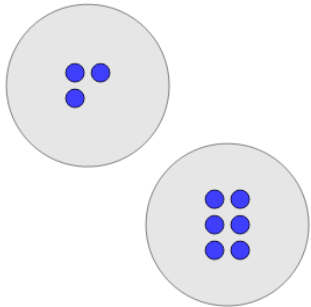
<b>a</b>	six	<b>b</b>	eleven
<b>c</b>	nine	<b>d</b>	four
<b>e</b>	twelve	<b>f</b>	thirteen

**2** How many blue circles are there?



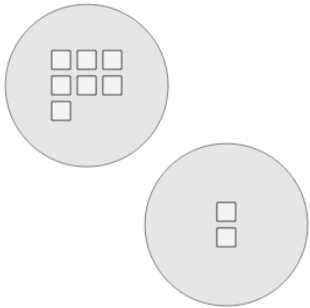
<b>a</b>	twelve	<b>b</b>	six
<b>c</b>	eleven	<b>d</b>	nine
<b>e</b>	seven	<b>f</b>	five

**3** How many blue circles are there?



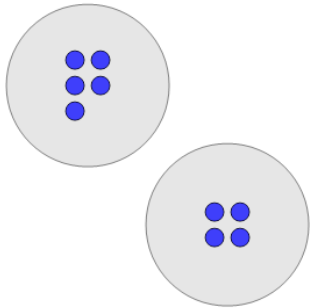
<b>a</b>	nine	<b>b</b>	twelve
<b>c</b>	thirteen	<b>d</b>	four
<b>e</b>	seven	<b>f</b>	six

**4** How many white squares are there?



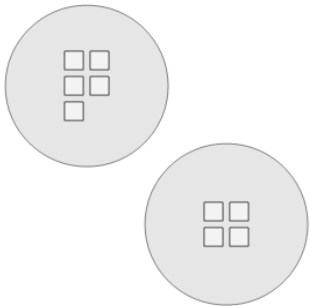
<b>a</b>	twelve	<b>b</b>	nine
<b>c</b>	thirteen	<b>d</b>	six
<b>e</b>	seven	<b>f</b>	five

**5** How many blue circles are there?



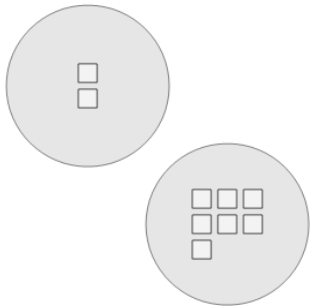
<b>a</b>	nine	<b>b</b>	eleven
<b>c</b>	five	<b>d</b>	six
<b>e</b>	twelve	<b>f</b>	four

**6** How many white squares are there?



<b>a</b>	seven	<b>b</b>	thirteen
<b>c</b>	nine	<b>d</b>	five
<b>e</b>	four	<b>f</b>	six

**7** How many white squares are there?



<b>a</b>	nine	<b>b</b>	five
<b>c</b>	thirteen	<b>d</b>	twelve
<b>e</b>	four		