

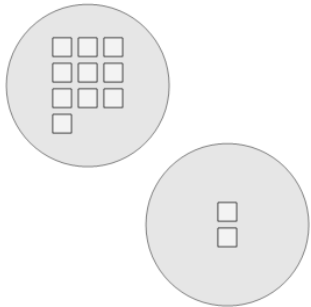


Math worksheet on 'Picture Numbers - Adding - Picture to Word (Level 3)'. Part of a broader unit on 'Picture Numbers - Addition and Subtraction'

Learn online:

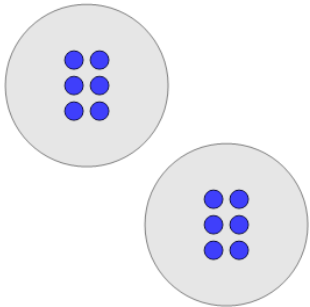
[app.mobius.academy/math/units/picture\\_numbers\\_addition\\_subtraction\\_practice/](http://app.mobius.academy/math/units/picture_numbers_addition_subtraction_practice/)

**1** How many white squares are there?



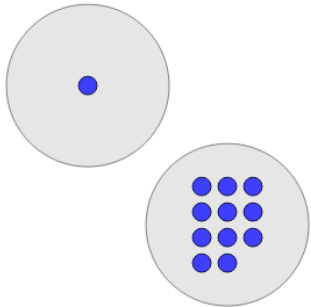
<b>a</b> sixteen	<b>b</b> fourteen
<b>c</b> ten	<b>d</b> nine
<b>e</b> seven	<b>f</b> twelve

**2** How many blue circles are there?



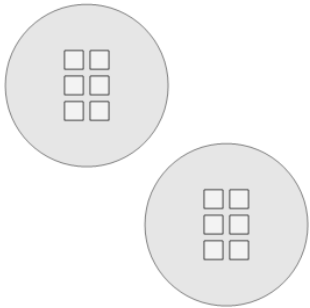
<b>a</b> twelve	<b>b</b> seven
<b>c</b> eight	<b>d</b> fourteen
<b>e</b> ten	<b>f</b> nine

**3** How many blue circles are there?



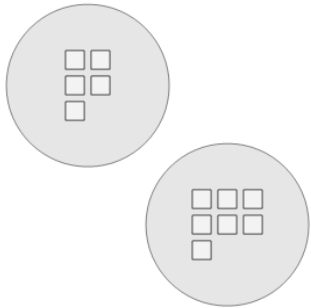
<b>a</b> seven	<b>b</b> nine
<b>c</b> eight	<b>d</b> ten
<b>e</b> twelve	<b>f</b> fourteen

**4** How many white squares are there?



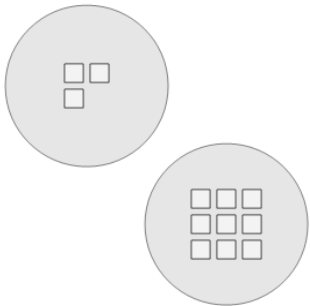
<b>a</b> sixteen	<b>b</b> nine
<b>c</b> ten	<b>d</b> twelve
<b>e</b> fifteen	<b>f</b> seven

**5** How many white squares are there?



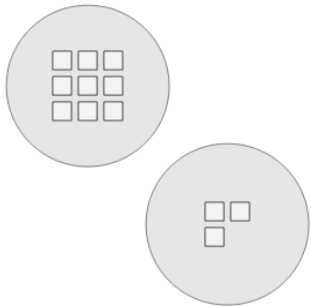
<b>a</b> sixteen	<b>b</b> twelve
<b>c</b> fifteen	<b>d</b> fourteen
<b>e</b> seven	

**6** How many white squares are there?



<b>a</b> fourteen	<b>b</b> ten
<b>c</b> fifteen	<b>d</b> nine
<b>e</b> twelve	<b>f</b> seven

**7** How many white squares are there?



<b>a</b> seven	<b>b</b> nine
<b>c</b> fifteen	<b>d</b> twelve
<b>e</b> fourteen	<b>f</b> ten