

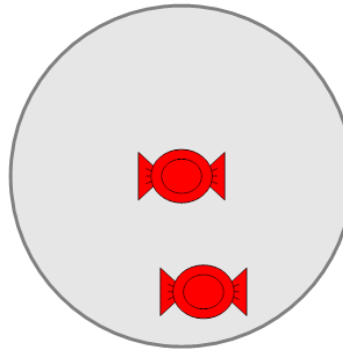


Math worksheet on 'Picture Numbers - Counting - Picture (Random) to Number (Level 2)'. Part of a broader unit on 'Picture Numbers - Addition and Subtraction'

Learn online:

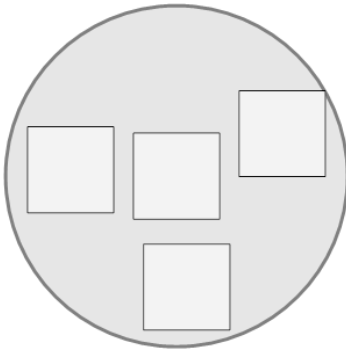
[app.mobius.academy/math/units/picture\\_numbers\\_addition\\_subtraction\\_practice/](http://app.mobius.academy/math/units/picture_numbers_addition_subtraction_practice/)

**1** How many red candies are shown?



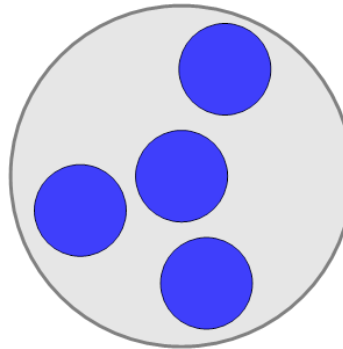
a	b	c
5	2	6

**2** How many white squares are shown?



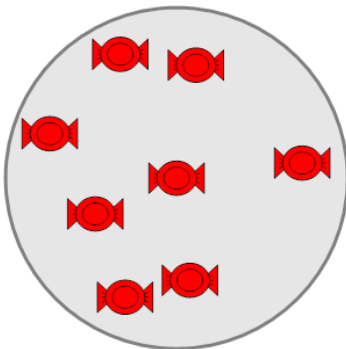
a	b	c
0	4	6

**3** How many blue circles are shown?



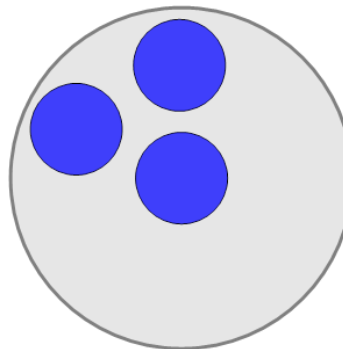
a	b	c
4	6	1
d	e	
7	8	

**4** How many red candies are shown?



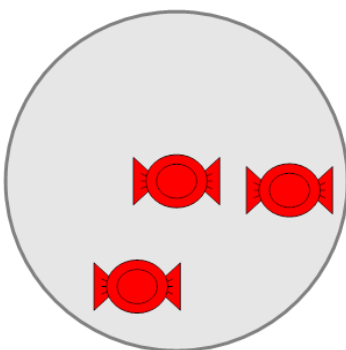
a	b	c
8	12	4
d	e	f
3	10	6

**5** How many blue circles are shown?



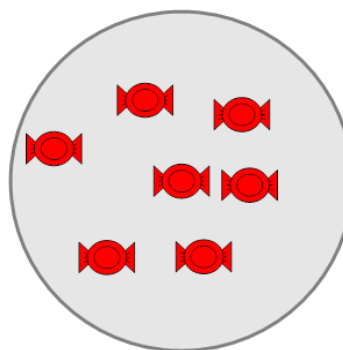
a	b	c
0	6	3

**6** How many red candies are shown?



a	b	c
3	0	7
d		
1		

**7** How many red candies are shown?



a	b	c
10	7	5
d		
3		