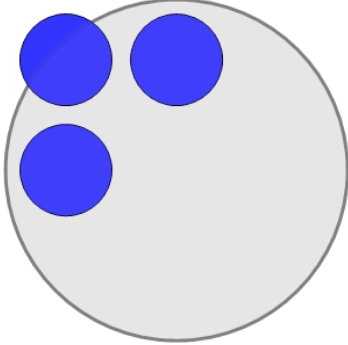




Math worksheet on 'Picture Numbers - Counting - Picture to Number (Level 1)'. Part of a broader unit on 'Picture Numbers - Addition Intro'

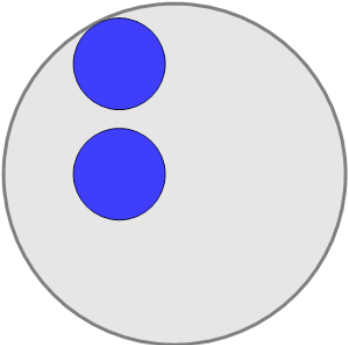
Learn online: [app.mobius.academy/math/units/picture\\_numbers\\_addition\\_intro/](http://app.mobius.academy/math/units/picture_numbers_addition_intro/)

**1** How many blue circles are shown?



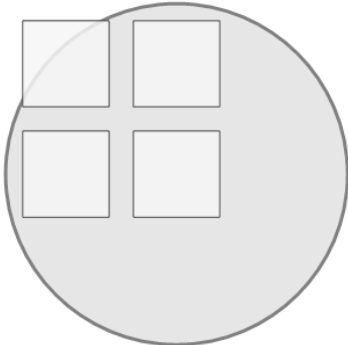
<b>a</b>	<b>b</b>	<b>c</b>
0	5	1
<b>d</b>	<b>e</b>	
3	6	

**2** How many blue circles are shown?



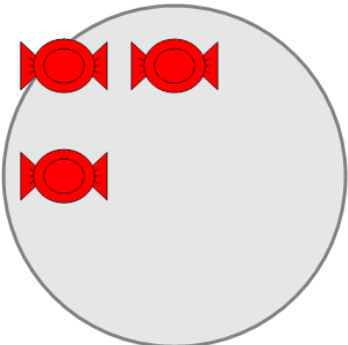
<b>a</b>	<b>b</b>	<b>c</b>
5	2	6
<b>d</b>	<b>e</b>	
4	0	

**3** How many white squares are shown?



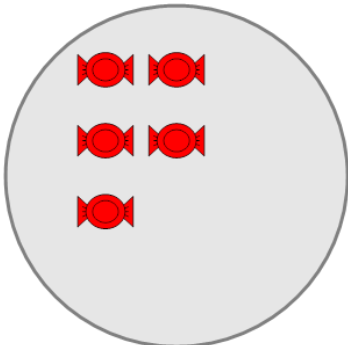
<b>a</b>	<b>b</b>	<b>c</b>
0	2	4

**4** How many red candies are shown?



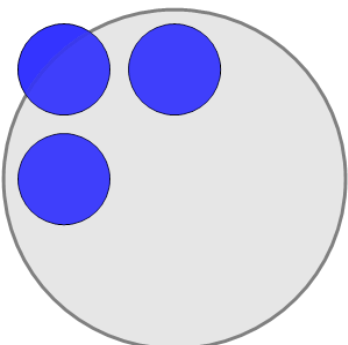
<b>a</b>	<b>b</b>	<b>c</b>
0	1	3
<b>d</b>	<b>e</b>	
6	5	

**5** How many red candies are shown?



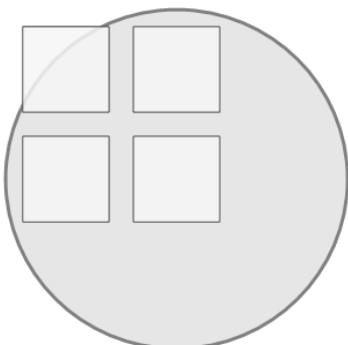
<b>a</b>	<b>b</b>	<b>c</b>
0	5	2
<b>d</b>		
3		

**6** How many blue circles are shown?



<b>a</b>	<b>b</b>	<b>c</b>
3	1	6
<b>d</b>	<b>e</b>	<b>f</b>
5	0	7

**7** How many white squares are shown?



<b>a</b>	<b>b</b>	<b>c</b>
6	0	1
<b>d</b>	<b>e</b>	
8	4	