

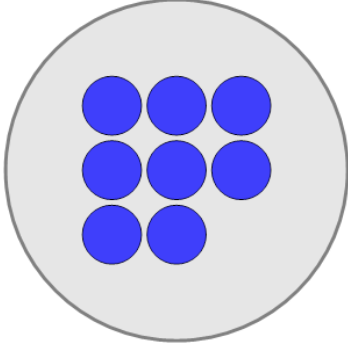


Math worksheet on 'Picture Numbers - Counting - Picture to Number (Level 3)'. Part of a broader unit on 'Picture Numbers - Addition and Subtraction'

Learn online:

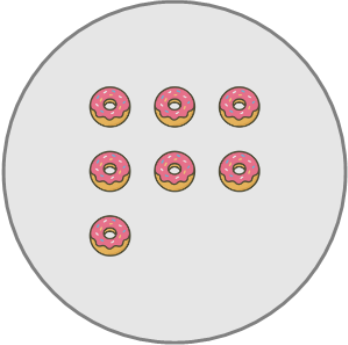
[app.mobius.academy/math/units/picture\\_numbers\\_addition\\_subtraction\\_practice/](http://app.mobius.academy/math/units/picture_numbers_addition_subtraction_practice/)

**1** How many circles are shown?



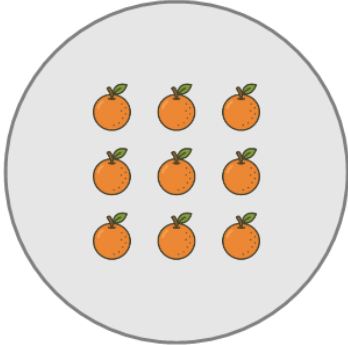
<b>a</b>	<b>b</b>	<b>c</b>
11	8	3
<b>d</b>	<b>e</b>	<b>f</b>
5	10	6

**2** How many donuts are shown?



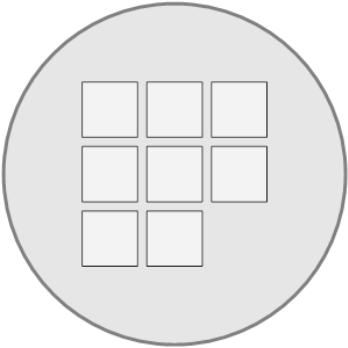
<b>a</b>	<b>b</b>	<b>c</b>
5	9	7
<b>d</b>	<b>e</b>	
11	2	

**3** How many oranges are shown?



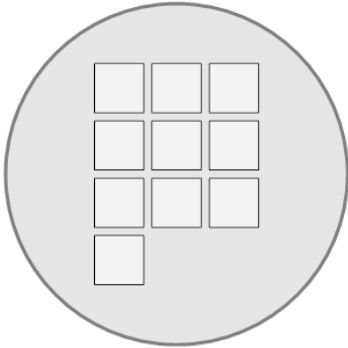
<b>a</b>	<b>b</b>	<b>c</b>
9	11	12
<b>d</b>	<b>e</b>	<b>f</b>
4	5	7

**4** How many squares are shown?



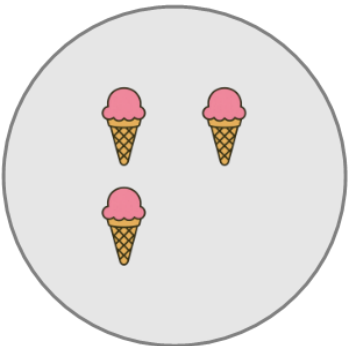
<b>a</b>	<b>b</b>	<b>c</b>
3	12	8
<b>d</b>	<b>e</b>	<b>f</b>
11	6	5

**5** How many squares are shown?



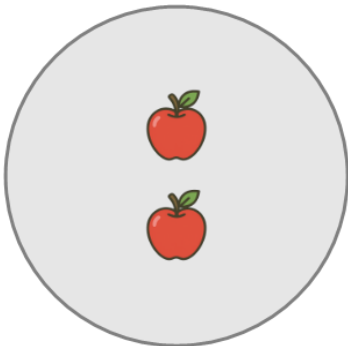
<b>a</b>	<b>b</b>	<b>c</b>
8	10	5
<b>d</b>	<b>e</b>	
7	14	

**6** How many ice creams are shown?



<b>a</b>	<b>b</b>	<b>c</b>
0	1	7
<b>d</b>	<b>e</b>	<b>f</b>
3	5	6

**7** How many apples are shown?



<b>a</b>	<b>b</b>	<b>c</b>
6	5	2