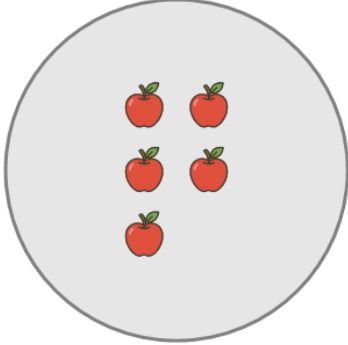




Math worksheet on 'Picture Numbers - Counting - Picture to Word (Level 1)'. Part of a broader unit on 'Picture Numbers - Addition Intro'

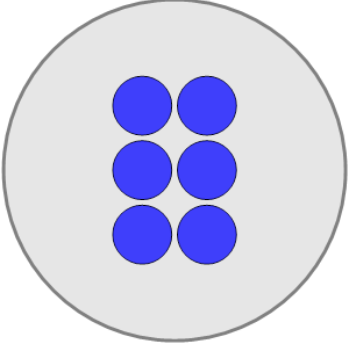
Learn online: [app.mobius.academy/math/units/picture\\_numbers\\_addition\\_intro/](http://app.mobius.academy/math/units/picture_numbers_addition_intro/)

**1** How many apples are shown?



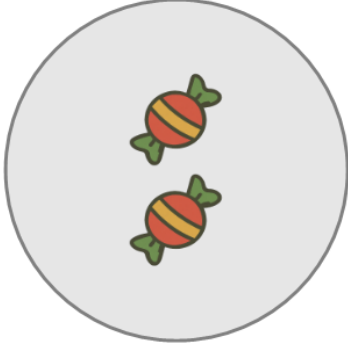
<b>a</b> five	<b>b</b> eight	<b>c</b> nine
<b>d</b> two	<b>e</b> zero	<b>f</b> one

**2** How many circles are shown?



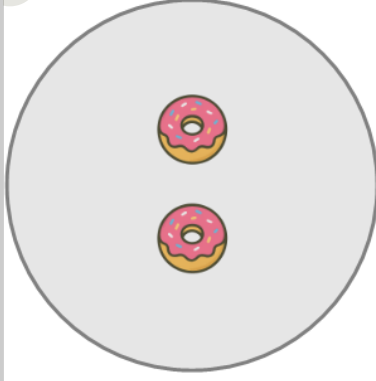
<b>a</b> three	<b>b</b> two	<b>c</b> four
<b>d</b> one	<b>e</b> six	

**3** How many candies are shown?



<b>a</b> two	<b>b</b> zero	<b>c</b> five
<b>d</b> six		

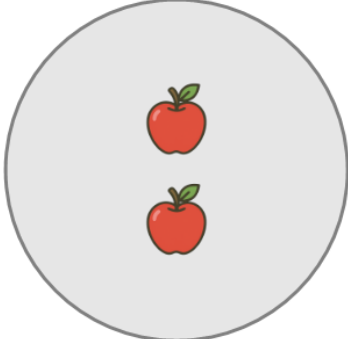
**4**



How many donuts are shown?

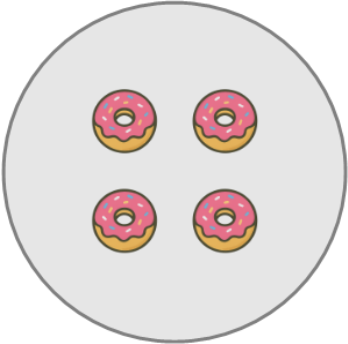
<b>a</b> two	<b>b</b> four
-----------------	------------------

**5** How many apples are shown?



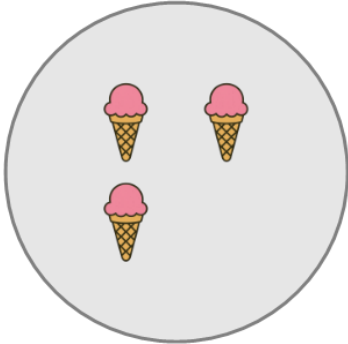
<b>a</b> zero	<b>b</b> five	<b>c</b> two
<b>d</b> four		

**6** How many donuts are shown?



<b>a</b> seven	<b>b</b> four	<b>c</b> two
<b>d</b> one		

**7** How many ice creams are shown?



<b>a</b> seven	<b>b</b> zero	<b>c</b> six
<b>d</b> one	<b>e</b> three	