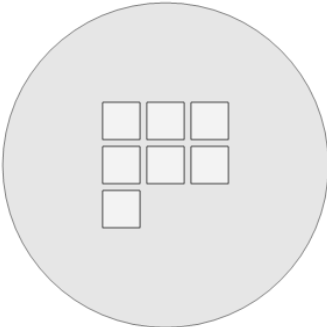




Math worksheet on 'Picture Numbers - Counting - Picture to Word (Level 2)'. Part of a broader unit on 'Picture Numbers - Subtraction Intro'

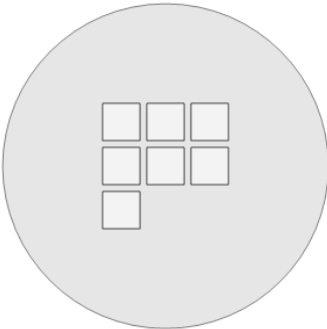
Learn online: [app.mobius.academy/math/units/picture\\_numbers\\_subtraction\\_intro/](http://app.mobius.academy/math/units/picture_numbers_subtraction_intro/)

**1** How many white squares are shown?



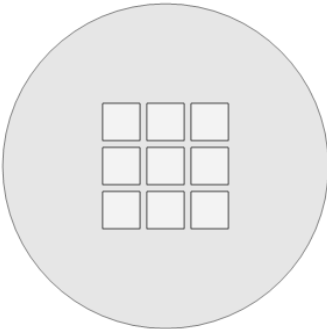
<b>a</b> seven	<b>b</b> five	<b>c</b> ten
<b>d</b> three	<b>e</b> nine	

**2** How many white squares are shown?



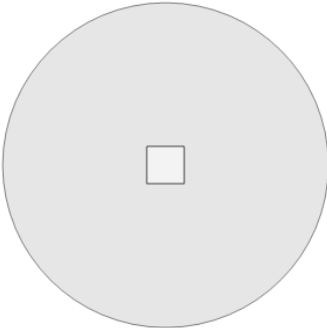
<b>a</b> ten	<b>b</b> seven	<b>c</b> five
<b>d</b> three		

**3** How many white squares are shown?




<b>a</b> thirteen	<b>b</b> four
<b>c</b> six	<b>d</b> nine
<b>e</b> five	<b>f</b> twelve

**4** How many white squares are shown?




<b>a</b> one	<b>b</b> four	<b>c</b> three

**5** How many blue circles are shown?



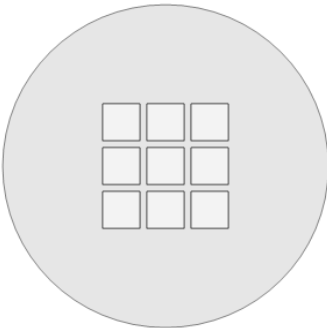
<b>a</b> five	<b>b</b> one	<b>c</b> nine

**6** How many blue circles are shown?



<b>a</b> four	<b>b</b> six	<b>c</b> one
<b>d</b> eight		

**7** How many white squares are shown?



<b>a</b> five	<b>b</b> four
<b>c</b> nine	<b>d</b> seven
<b>e</b> thirteen	