




Math worksheet on 'Picture Numbers - Subtracting - Picture and Instruction to Number (Level 2)'. Part of a broader unit on 'Picture Numbers - Addition and Subtraction'

Learn online:

app.mobius.academy/math/units/picture_numbers_addition_subtraction_practice/

1 How many white squares will be left if you remove 3?

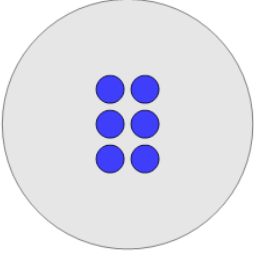
a	b	c
5	7	0
d	e	
3	1	



Remove 3 squares

2 How many blue circles will be left if you remove 4?


a	b	c
2	5	4
d	e	
0	6	



Remove 4 circles

3 How many white squares will be left if you remove 1?


a	b	c
2	1	3
d		
5		



Remove 1 square

4 How many blue circles will be left if you remove 4?


a	b	c
5	6	4
d		
2		



Remove 4 circles

5 How many blue circles will be left if you remove 1?


a	b	c
6	3	7
d	e	
5	1	



Remove 1 circle

6 How many white squares will be left if you remove 1?


a	b	c
8	5	0
d	e	f
2	9	3



Remove 1 square

7 How many blue circles will be left if you remove 1?

a	b	c
2	6	5
d		
0		



Remove 1 circle