




Math worksheet on 'Picture Numbers - Subtracting - Picture and Instruction to Number (Level 3)'. Part of a broader unit on 'Picture Numbers - Addition and Subtraction'

Learn online:

app.mobius.academy/math/units/picture_numbers_addition_subtraction_practice/


1 How many white squares will be left if you remove 4?



a	b	c
4	2	6
d		
5		

Remove 4 squares

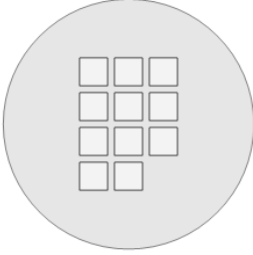
2 How many white squares will be left if you remove 4?



a	b	c
5	2	3
d	e	f
9	1	0

Remove 4 squares


3 How many white squares will be left if you remove 1?



a	b	c
12	7	10
d	e	
13	6	

Remove 1 square

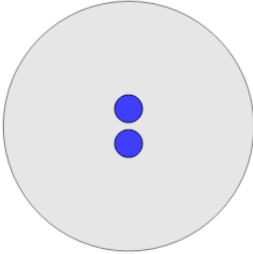
4 How many blue circles will be left if you remove 2?



a	b	c
5	2	0
d	e	f
3	7	1

Remove 2 circles

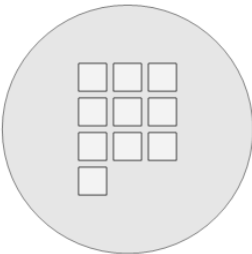
5 How many blue circles will be left if you remove 1?



a	b	c
5	3	4
d		
1		

Remove 1 circle


6 How many white squares will be left if you remove 2?



a	b	c
5	8	3
d	e	
12	10	

Remove 2 squares

7 How many blue circles will be left if you remove 6?



a	b	c
9	2	7
d	e	f
8	3	5

Remove 6 circles