

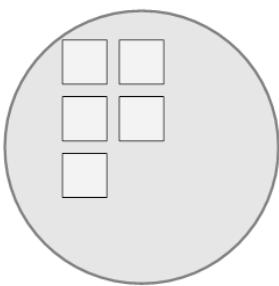


Math worksheet on 'Picture Numbers - Subtracting - Picture and Instruction to Word (Level 3)'. Part of a broader unit on 'Picture Numbers - Addition and Subtraction'

Learn online:

app.mobius.academy/math/units/picture_numbers_addition_subtraction_practice/

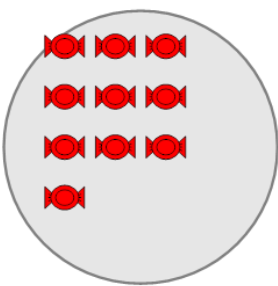
1 How many white squares will be left if you remove 4?



Remove 4 squares

a	b	c
five	four	three
d		
one		

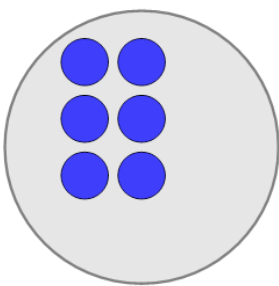
2 How many red candies will be left if you remove 4?



Remove 4 candies

a	b	c
four	three	six
d	e	
one	ten	

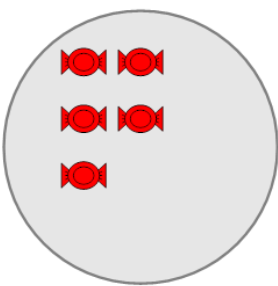
3 How many blue circles will be left if you remove 2?



Remove 2 circles

a	b	c
four	one	eight
d		
two		

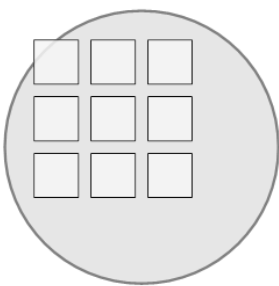
4 How many red candies will be left if you remove 3?



Remove 3 candies

a	b	c
two	four	six
d		
zero		

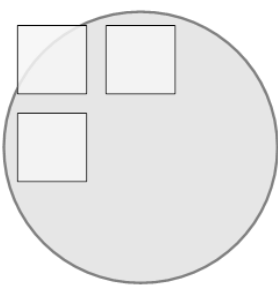
5 How many white squares will be left if you remove 6?



Remove 6 squares

a	b	c
one	six	three
d	e	
five	seven	

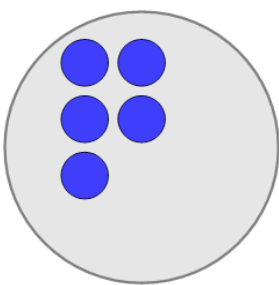
6 How many white squares will be left if you remove 1?



Remove 1 square

a	b	c
two	zero	five
d	e	
four	six	

7 How many blue circles will be left if you remove 2?



Remove 2 circles

a	b	c
five	three	zero
d		
one		