

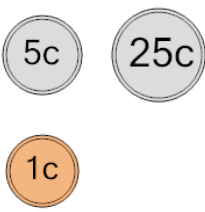


Math worksheet on 'Probability - Coins (3), All Specific, To Percent (Level 1)'. Part of a broader unit on 'Probability and Counting - Multiple Events - Intro'

Learn online:

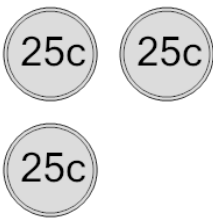
app.mobius.academy/math/units/probability_counting_multiple_event_intro/

1 What is the chance of flipping tails on all these coins?



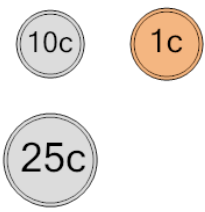
a	b	c
10%	7.1%	28.6%
d	e	f
12.5%	15.8%	7.7%

2 What is the chance of flipping heads on all these coins?



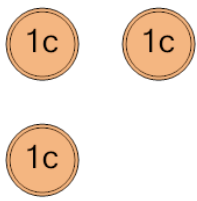
a	b	c
15.4%	5.3%	37.5%
d	e	f
12.5%	37.5%	11.1%

3 What is the chance of flipping heads on all these coins?



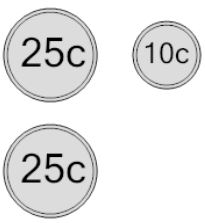
a	b	c
22.2%	27.3%	12.5%
d	e	f
66.7%	11.8%	9.1%

4 What is the chance of flipping tails on all these coins?



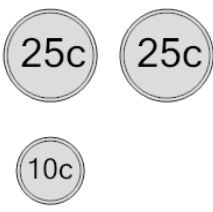
a	b	c
16.7%	22.2%	12.5%
d	e	f
16.7%	7.7%	7.1%

5 What is the chance of flipping tails on all these coins?



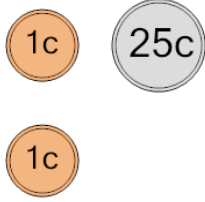
a	b	c
33.3%	33.3%	60%
d	e	f
16.7%	20%	12.5%

6 What is the chance of flipping tails on all these coins?



a	b	c
28.6%	60%	30%
d	e	f
5.6%	16.7%	12.5%

7 What is the chance of flipping heads on all these coins?



a	b	c
10%	66.7%	12.5%
d	e	f
11.8%	14.3%	20%