




Math worksheet on 'Probability - Coins (2), Not All Specific, To Percent (Level 1)'. Part of a broader unit on 'Probability and Counting - Multiple Events - Practice'

Learn online:

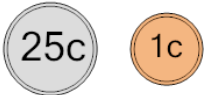
app.mobius.academy/math/units/probability_counting_multiple_event_practice/

1 What is the chance of NOT flipping both heads on these coins?




a	50%	b	25%
c	22.2%	d	175%
e	75%	f	233.3%

2 What is the chance of NOT flipping both heads on these coins?



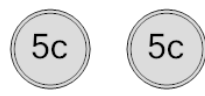
a	50%	b	10%	c	75%
d	55.6%	e	63.6%	f	36.4%

3 What is the chance of NOT flipping both heads on these coins?




a	57.1%	b	20%	c	75%
d	125%	e	50%	f	42.9%

4 What is the chance of NOT flipping both heads on these coins?



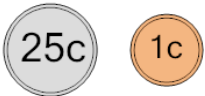
a	25%	b	60%	c	125%
d	75%	e	100%	f	36.4%

5 What is the chance of NOT flipping both tails on these coins?



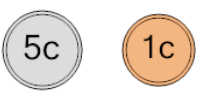
a	40%	b	44.4%	c	200%
d	66.7%	e	75%	f	66.7%

6 What is the chance of NOT flipping both heads on these coins?



a	14.3%	b	60%
c	71.4%	d	166.7%
e	75%	f	60%

7 What is the chance of NOT flipping both heads on these coins?



a	30%	b	200%	c	20%
d	75%	e	37.5%	f	175%